

# Organic Chemistry

with a Biological Emphasis

By

Tim Soderberg

University of Minnesota, Morris

UC San Diego Edition

Edited with permission from the author by  
Valerie A. Schmidt & Haim Weizman

AY23-24



This work is licensed under the Creative Commons Attribution-NonCommercial-ShareAlike 4.0 International License. <https://creativecommons.org/licenses/by-nc-sa/4.0/>

# Chapter 3

## Conformation and stereochemistry

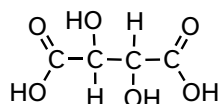


(Credit: <https://www.flickr.com/photos/nate/>)

In 1848, a 25-year-old chemist named Louis Pasteur made a startling - and some thought brash - claim to the scientific community. Pasteur was inexperienced, to say the least: he had only earned his doctorate the previous year and had just started his first job as an assistant to a professor at the *Ecole normale superieure*, a university in Paris. Jean-Baptiste Biot, a highly respected physicist who had already made major contributions to scientific fields as diverse as meteorites, magnetism, and optics, was intrigued but unconvinced by Pasteur's claim. He invited the young man to come to his laboratory and reproduce his experiments.

Decades earlier, Biot had discovered that aqueous solutions of some biologically derived substances, such as tartaric acid, quinine, morphine, and various sugars, were optically active: that is, plane polarized light would rotate in either a positive (clockwise, or right-handed) or negative (counter-clockwise, or left-handed) direction when passed through the solutions. Nobody understood the source of this optical property.

One of the biological substances known to be optically active was a salt of tartaric acid, a compound found in abundance in grapes and a major by-product of the wine-making industry.



**tartaric acid**

The compound was dextrorotatory in solution – in other words, it rotated plane-polarized light in the positive (right-handed, or clockwise) direction. Curiously, though, chemists had also found that another form of processed tartaric acid was optically *inactive*, despite that fact that it appeared to be identical to the optically active acid in every other respect. The optically inactive compound was called '*acide racémique*', from the Latin *racemus*, meaning 'bunch of grapes'.

Louis Pasteur's claims had to do with experiments he said he had done with the 'racemic' acid. Jean-Baptiste Biot summoned Pasteur to his laboratory, and presented him with a sample of racemic acid which he himself had already confirmed was optically inactive. With Biot watching over his shoulder, and using Biot's reagents, Pasteur prepared the salt form of the acid, dissolved it in water, and left the aqueous solution in an uncovered flask to allow crystals to slowly form as the water evaporated.

Biot again summoned Pasteur to the lab a few days later when the crystallization was complete. Pasteur placed the crystals under a microscope, and began to painstakingly examine their shape, just as he had done in his original experiments. He had recognized that the crystals, which had a regular shape, were asymmetric: in other words, they could not be superimposed on their mirror image. Scientists referred to asymmetric crystals and other asymmetric objects as being 'chiral', from the Greek word for 'hand'. Your hands are chiral objects, because although your right hand and your left hand are mirror images of one another, they cannot be superimposed. That is why you cannot fit your right hand in a left-handed glove.

More importantly, Pasteur had claimed that the chiral crystals he was seeing under the lens of his microscope were of two different types, and the two types were mirror images of each other: about half were what he termed 'right-handed' and half were 'left-handed'. He carefully separated the right and left-handed crystals from each other and presented the two samples to Biot. The eminent scientist then

took what Pasteur told him were the left-handed crystals, dissolved them in water, and put the aqueous solution in a polarimeter, an instrument that measures optical rotation. Biot knew that the processed tartaric acid he had provided Pasteur had been optically inactive. He also knew that unprocessed tartaric acid from grapes had right-handed optical activity, whereas left-handed tartaric acid was unheard of. Before his eyes, however, he now saw that the solution was rotating light to the left. He turned to his young colleague and exclaimed, "*Mon cher enfant, j'ai tant aimé les sciences dans ma vie que cela me fait battre le coeur!*" (My dear child, I have loved science so much during my life that this makes my heart pound!)

Biot had good reason to be so profoundly excited. Pasteur had just conclusively demonstrated, for the first time, the concept of **molecular chirality**: molecules themselves - not just macroscopic objects like crystals - could exhibit chirality, and could be separated into distinct right-handed and left-handed 'stereoisomers'. Tying together ideas from physics, chemistry, and biology, he had shown that nature could be chiral *at the molecular level*, and in doing so he had introduced to the world a new subfield that came to be known as 'stereochemistry'.

About ten years after his demonstration of molecular chirality, Pasteur went on to make another observation with profound implications for biological chemistry. It was already well known that 'natural' tartaric acid (the right-handed kind from grapes) could be fermented by bacteria. Pasteur discovered that the bacteria were selective about the chirality of tartaric acid: no fermentation occurred when the bacteria were provided with pure left-handed acid, and when provided with racemic acid they specifically fermented the right-handed component, leaving the left-handed acid behind.

Pasteur was not aware, at the time of the discoveries described here, the details of the structural features of tartaric acid at the molecular level that made the acid chiral, although he made some predictions concerning the bonding patterns of carbon which turned out to be remarkably accurate. In the more than 150 years since Pasteur's initial tartaric acid work, we have expanded our understanding of molecular chirality, and it is this knowledge that makes up the core of this chapter. Put simply, stereochemistry is the study of how bonds are oriented in three-dimensional space. It is difficult to overstate the importance of stereochemistry in nature, and in the fields of biology and medicine in particular. As Pasteur so convincingly demonstrated, life itself is chiral: living things recognize different stereoisomers of organic compounds and process them accordingly.

**Molecular models are your friend!**

*Because this chapter deals extensively with concepts that are inherently three-dimensional in nature, it will be especially important for you to use a molecular modeling kit that is specifically intended for organic chemistry. Many of the ideas we will be exploring can be extremely confusing if you are limited to the two dimensions of this page. Be prepared to follow along with these discussions in **three** dimensions, with a molecular model in your hands!*

**Learning Outcomes**

- Explain the single bond rotation and conformations of ethane, propane, butane, etc. using Newman projections
- Draw an energy diagram showing the change in potential energy in the different conformations upon rotation. Identify and label  $\Delta H$ , and any transition states or intermediates (qualitative)
- Given any two molecular structures with identical molecular formula, classify them as constitutional or stereoisomers
- Determine if a molecule is chiral or achiral by examining the 3D structure for mirror planes
- Determine if two stereoisomers are related by mirror symmetry (i.e., mirror images) or not; correctly classify them as enantiomers or diastereomers; and predict whether they will have similar or different properties (i.e., bp, mp, solubility, reactivity)
- Given a molecular structure, identify all stereocenters and assign the absolute configuration using Cahn, Ingold and Prelog priority rules. Use mirror planes to identify meso compounds arising from multiple stereoisomers
- Be able to convert a Fischer or Haworth projection into the more common bond-line representation for analysis.
- Identify the same molecule represented as Fischer and Haworth projections
- Explain the term racemate and how to use diastereomerism to separate and resolve enantiomers
- Apply the above concepts with sugar molecules

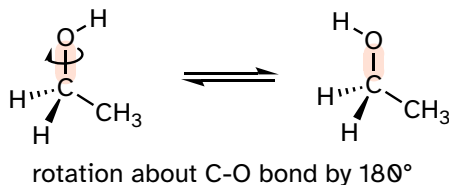
**Section 3.1: Conformations of open-chain organic molecules**

Before we begin our exploration of stereochemistry and chirality, we first need to consider the subject of **conformational** isomerism, which has to do with rotation about single bonds.

We learned in section 2.1B that single bonds in organic molecules are free to rotate, due to the 'end-to-end' ( $\sigma$ ) nature of their orbital overlap. Consider the

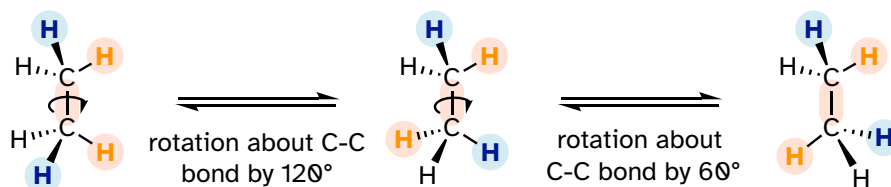
carbon-oxygen bond in ethanol, for example: with a  $180^\circ$  rotation about this bond, the shape of the molecule would look quite different:

3.1.1



Or ethane: rotation about the carbon-carbon  $\sigma$  bond results in many different possible three-dimensional arrangements of the atoms.

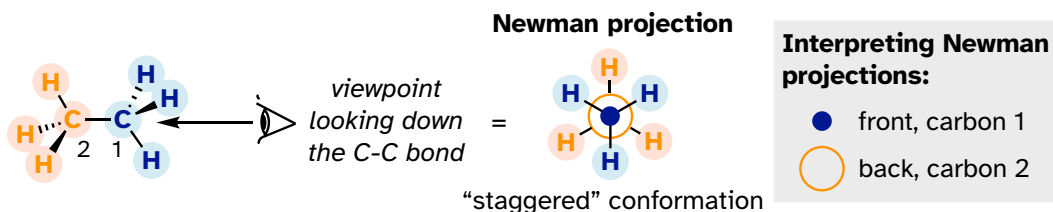
3.1.2



These different arrangements, resulting from  $\sigma$  bond rotation, are referred to in organic chemistry as **conformations**. Any one specific conformation is called a **conformational isomer**, or **conformer**.

To better visualize different conformations of a molecule, it is convenient to use a drawing convention called the **Newman projection**. In a Newman projection, we look lengthwise down a specific bond of interest – in this case, the carbon-carbon bond in ethane. We depict the ‘front’ atom as a dot, and the ‘back’ atom as a larger circle.

3.1.3



[Interactive model](#)

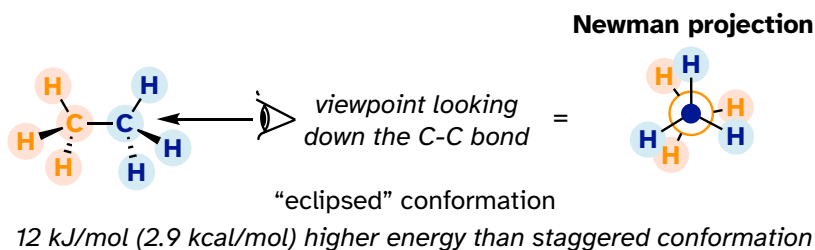
The six carbon-hydrogen bonds are shown as solid lines protruding from the two carbons. Note that we do *not* draw bonds as solid or dashed wedges in a Newman projection.

Looking down the C-C bond in this way, the angle formed between a C-H bond on the front carbon and a C-H bond on the back carbon is referred to as a **dihedral angle**. (The dihedral angle between the hour hand and the minute hand on a clock is  $0^\circ$  at noon,  $90^\circ$  at 3:00, and so forth).

The lowest energy conformation of ethane, shown in the figure above, is called the '**staggered**' conformation: all the dihedral angles are  $60^\circ$ , and the distance between the front and back C-H bonds is maximized.

If we now rotate the front  $\text{CH}_3$  group  $60^\circ$  clockwise, the molecule is in the highest energy '**eclipsed**' conformation, where the dihedral angles are all  $0^\circ$  (we stagger the bonds slightly in our Newman projection drawing so that we can see them all).

## 3.1.4



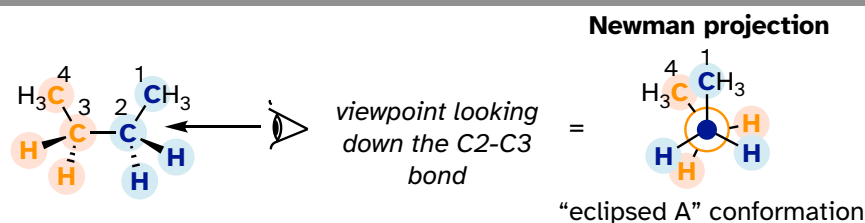
The energy of the eclipsed conformation, where the electrons in the front and back C-H bonds are closer together, is approximately 12 kJ/mol (2.9 kcal/mol) higher than that of the staggered conformation.

Another  $60^\circ$  rotation returns the molecule to a second staggered conformation. This process can be continued all around the  $360^\circ$  circle, with three possible eclipsed conformations and three staggered conformations, in addition to an infinite number of conformations in between these two extremes.

[video tutorial: conformations of ethane](#)

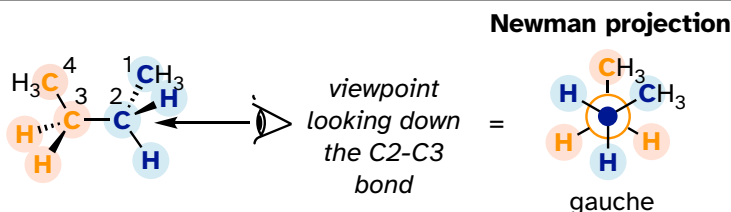
Now let's consider butane, with its four-carbon chain. There are now three rotating carbon-carbon bonds to consider, but we will focus on the middle bond between C2 and C3. Below are two representations of butane in a conformation which puts the two  $\text{CH}_3$  groups (C1 and C4) in the eclipsed position, with the two C-C bonds at a  $0^\circ$  dihedral angle.

## 3.1.5



If we rotate the front, (blue) carbon by  $60^\circ$  clockwise, the butane molecule is now in a staggered conformation.

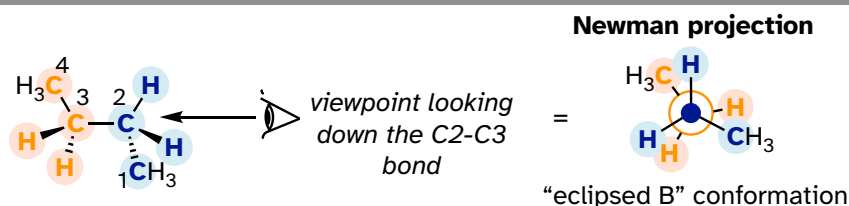
## 3.1.6



This is more specifically referred to as the **gauche** conformation of butane. Notice that although they are staggered, the two methyl groups are not as far apart as they could possibly be.

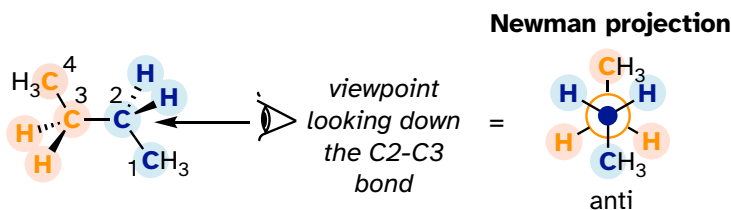
A further rotation of  $60^\circ$  gives us a second eclipsed conformation (B) in which both methyl groups are lined up with hydrogen atoms.

## 3.1.7



One more  $60^\circ$  rotation produces another staggered conformation called the **anti** conformation, where the two methyl groups are positioned opposite each other (a dihedral angle of  $180^\circ$ ).

## 3.1.8

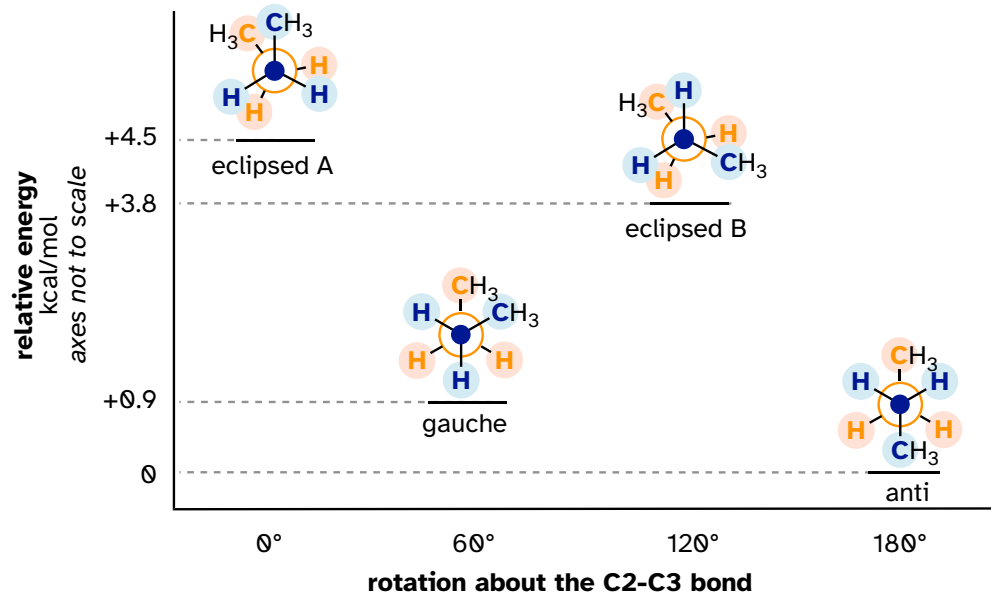




As with ethane, the staggered conformations of butane are energy 'valleys', and the eclipsed conformations are energy 'peaks'. However, in the case of butane there are two different valleys and two different peaks. The gauche conformation is a higher energy valley than the anti conformation due to **steric strain**, which is the repulsive interaction caused by the two bulky methyl groups being forced too close together. Steric strain is lower in the anti conformation. In the same way, steric strain causes the eclipsed A conformation - where the two methyl groups are as close together as they can possibly be - to be higher in energy than the two eclipsed B conformations.

The diagram below summarizes the relative energies for the various eclipsed, staggered, and gauche conformations of butane.

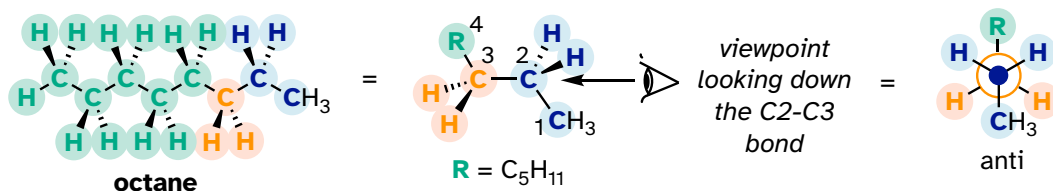
## 3.1.9



[Interactive model of butane](#)  
[Video tutorial: conformations of butane](#)

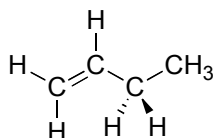
Because the anti conformation is lowest in energy (and simply for ease of drawing), it is conventional to draw open-chain alkanes in a 'zigzag' form, which implies anti conformation at all carbon-carbon bonds. The figure below shows, as an example, a Newman projection looking down the C2-C3 bond of octane.

## 3.1.10



**Exercise 3.1:** Draw Newman projections of the lowest and highest energy conformations of propane.

**Exercise 3.2:** Draw a Newman projection, looking down the C2-C3 bond, of 1-butene in the conformation shown below (C2 should be your *front* carbon).

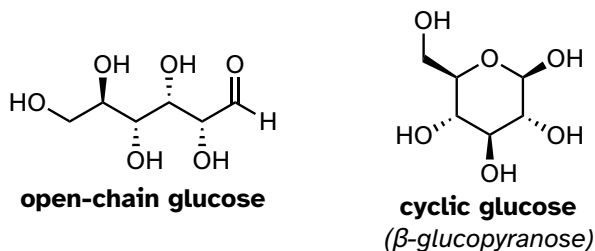


### Section 3.2: Conformations of cyclic organic molecules

Browse through a biochemistry textbook and you will see any number of molecules with cyclic structures. Many of these cyclic structures are aromatic, and therefore planar. Many others, though, are composed of  $sp^3$ -hybridized atoms, and it is these cyclic structures that are the topic of discussion in this section.

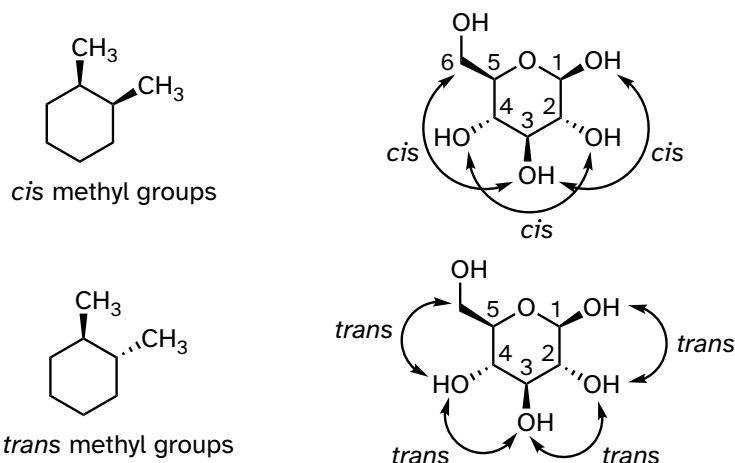
When discussing cyclic organic molecules, we will often use sugars as examples, because they are such important molecules in biological chemistry. It is important to recall (section 1.3C) that many sugars exist in aqueous solution as both open-chain and cyclic forms. You need not worry at this point about understanding how the cyclic form is named, or the reaction by which the cyclization occurs - this will be covered in chapter 10.

#### 3.2.1




One thing that you should notice in the cyclic structure shown above is that atoms or groups bonded to tetrahedral ring carbons are either pointing up (out of the plane of the page) or down (into the plane of the page), as indicated using dashed or solid wedge bonds. When two substituents on the same ring are both pointing toward the same side of the ring, they are said to be **cis** to each other. When they are pointed to opposite sides, they are said to be **trans** to each other.

## 3.2.2



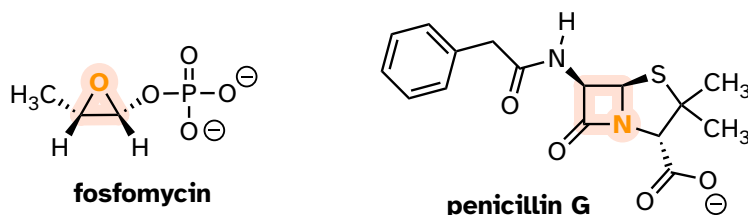
Ring structures in organic molecules are usually five-membered or six-membered. Three- and four-membered rings are occasionally found in nature but are significantly higher in energy. The relative instability of these smaller ring structures can be explained by a concept called **angle strain**, in which the four bonds around the  $sp^3$ -hybridized carbons are forced out of their preferred tetrahedral angles.

## 3.2.3



If one of the carbon-carbon bonds is broken, the ring will 'spring' open, releasing energy as the bonds reassume their preferred tetrahedral geometry. The effectiveness of two antibiotic drugs, fosfomycin and penicillin, is due in large part to the high reactivity of the three- and four-membered rings in their structures.

## 3.2.4



In six-membered cycloalkane structures, bonding angles are close to tetrahedral, and thus ring strain is not a factor – these rings are in fact very stable. However,

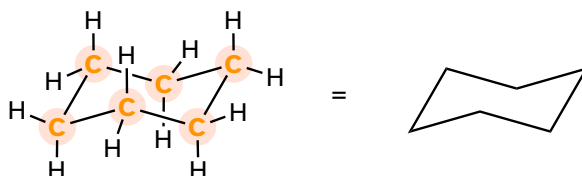
the 'flat' drawings we have been using up to now do not accurately show the actual three-dimensional shape of a five- or six-membered ring. If cyclohexane were indeed flat, the bond angles would have to be distorted from  $109.5^\circ$  to  $120^\circ$ . If you build a model, though, you will find that when you rotate the carbon-carbon bonds to put the ring into a shape that resembles a reclining beach chair, all the carbon-carbon bonds are able to assume tetrahedral bonding angles.

## 3.2.5

---

**"Chair" Conformation of Cyclohexane**


---



[Interactive model](#)

This **chair conformation** is the lowest energy conformation for cyclohexane and other six-membered rings.

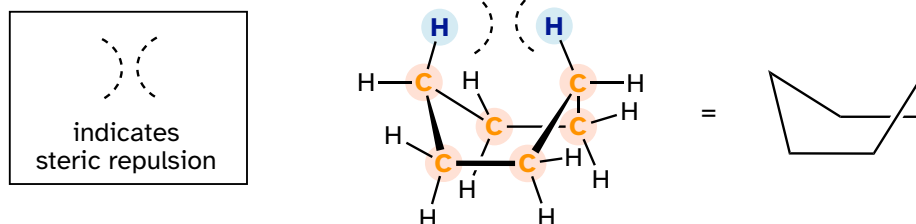
An alternate conformation for a six-membered ring is called the '**boat**':

## 3.2.6

---

**"Boat" Conformation of Cyclohexane**


---

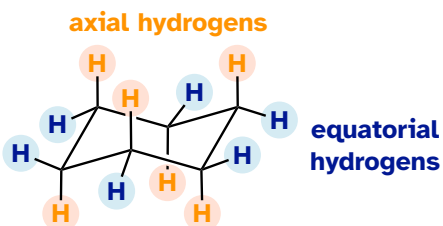


In the boat conformation, two of the substituents – those on the 'bow' and the 'stern' if you will – are brought close enough to each other to cause steric strain. An additional cause of the higher energy of the boat conformation is that adjacent hydrogen atoms on the 'bottom of the boat' are forced into eclipsed positions. For these reasons, the boat conformation is a high-energy conformation of cyclohexane, about  $30 \text{ kJ/mol}$  ( $7.2 \text{ kcal/mol}$ ) less stable than the chair conformation.

If you look carefully at your model of cyclohexane in the chair conformation, you will see that all twelve hydrogens are not equivalent in terms of their three-dimensional arrangement in space. Six hydrogens are **axial** – that is, they are pointing either straight up or straight down relative to the ring. The other six hydrogens are **equatorial**, meaning that they are pointing away from the perimeter of the ring, either slightly up or slightly down. (*The equatorial vs axial distinction is*

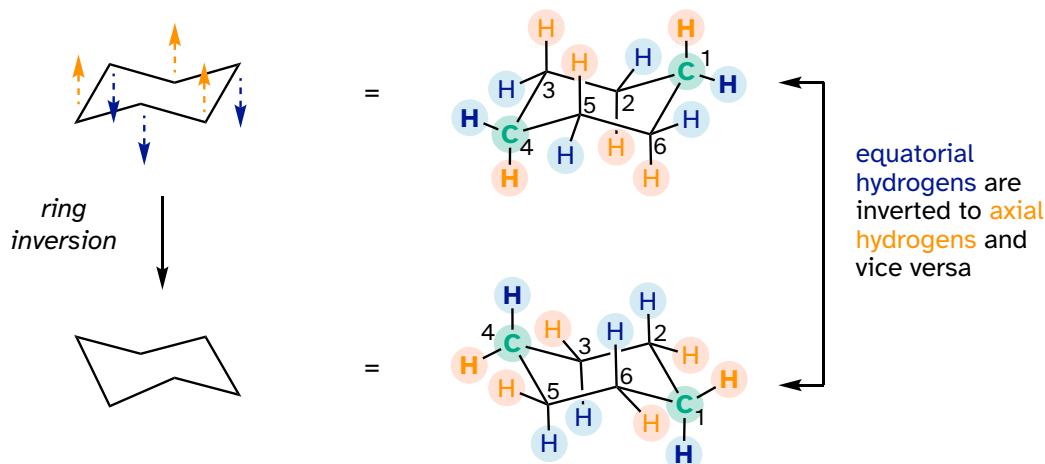
often hard to see at first - it would be a very good idea at this point to work with a modeling kit).

## 3.2.7



This is not the only possible chair conformation for cyclohexane. On your model, rotate one of the 'up' carbons down, and one of the 'down' carbons up. You now have a new, alternate chair conformation – this process is called **ring inversion**.

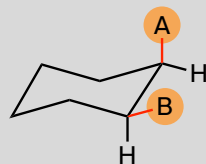
## 3.2.8



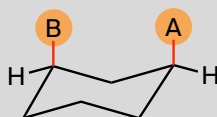
What you should recognize here is that, because of the ring inversion process, all the axial and equatorial hydrogens have traded positions – axial hydrogens have become equatorial, and vice-versa. Notice, however, that the 'down' hydrogens are still pointing down, and the 'up' hydrogens are still pointing up regardless of whether they are axial or equatorial. At room temperature, cyclohexane is constantly inverting between two chair forms of equal energy – it is a rapid equilibrium situation. Thus, except at very low temperatures, we are not able to distinguish between axial and equatorial hydrogens, as they are constantly switching back and forth.

**axial/equatorial vs cis/trans**

A very common error made by organic chemistry students as they begin to learn about chair conformations is to confuse the terms axial and equatorial with the terms *cis* and *trans*. **These are completely different things!** For example, when two substituents on a ring are *cis* in relation to one another, it means that they are pointed to the same side of the ring (both up or both down). Depending on their positions on the ring, they might both be axial, both be equatorial, or one of each.



A and B are *cis* to each other (both going up)  
A is axial, B is equatorial



A and B are *cis* to each other (both going up)  
both are axial

Do not make the mistake of calling two substituents *trans* to each other merely because one is equatorial and one is axial, or *cis* because they are both axial or both equatorial.

**How to draw the cyclohexane chair conformation:**

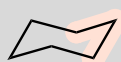
As an organic chemistry student, you will be expected to be able to draw an accurate representation of the chair conformations of six-membered cycloalkanes, which includes being able to draw axial and equatorial substituents with their correct orientations. Here, then, are some guidelines to follow:



1. Draw two parallel lines, sloped slightly down



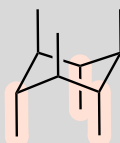
2. Connect the lines with a 'V' sloped slightly left and down



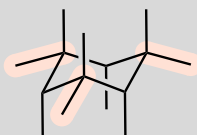
3. Connect the lines with a 'V' sloped slightly right and up



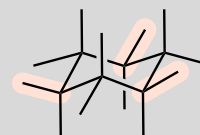
4. Draw axial bonds straight up from up-pointing carbons



5. Draw axial bonds straight down from down-pointing carbons

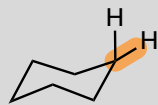


6. Draw equatorial bonds out and slightly down on carbons with up-pointing axial bonds



7. Draw equatorial bonds out and slightly up on carbons with down-pointing axial bonds

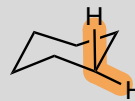
(How **not** to draw the chair):



Incorrect. Equatorial bond should be down and out



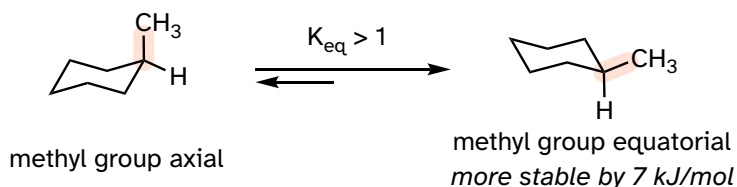
Incorrect. Axial bond should be straight up



Incorrect. Axial bond should be straight down, equatorial bond should be up and out

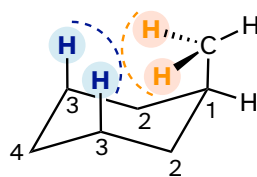
What happens to the relative energies of chair conformations when the ring has a large substituent, such as a methyl group? Now, the two chair conformations are quite different: in one, the methyl group is equatorial and in the other it is axial.

3.2.9



When the methyl group is in the axial position, it is brought close enough to the axial hydrogens on carbons two bonds away to cause destabilizing steric repulsion: this is referred to as **1,3-diaxial repulsion**.

3.2.10



**1,3-diaxial repulsion**

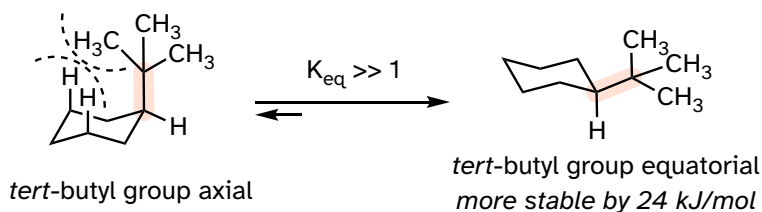
When in the equatorial position, the methyl group is pointing up and away from the rest of the ring, eliminating the unfavorable 1,3-diaxial interaction. Consequently, the conformation in which the methyl group is in the equatorial position is more stable, by approximately 7 kJ/mol (1.7 kcal/mol). At room temperature, methylcyclohexane exists as a rapid equilibrium between the two chair forms (and many other intermediate conformations), but the equilibrium constant ( $K_{eq}$ ) favors the conformation where the methyl group is equatorial.



**Exercise 3.3:** Here's some General Chemistry review: what is the value of  $K_{eq}$  at 25 °C for the axial to equatorial interconversion of methylcyclohexane as shown in the previous figure?

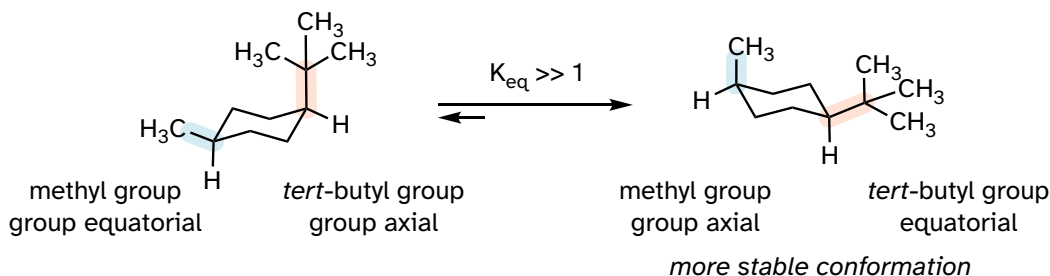
The importance of the steric strain factor increases with the increasing size of a substituent. For example, the difference in energy between the two chair conformations of *tert*-butyl cyclohexane (24 kJ/mol) is much larger than for methylcyclohexane (7 kJ/mol), because a *tert*-butyl group is larger than a methyl group and results in more energetically unfavorable 1,3-diaxial interactions.

## 3.2.11



In the case of a disubstituted cyclohexane ring in which both substituents cannot be equatorial, the lower energy conformation generally places the bulkier substituent in the equatorial position.

## 3.2.12



**As a general rule, the most stable chair conformation of a six-membered ring will be that in which the bulkiest groups are in the equatorial position.**

**Exercise 3.4:** Draw the lower energy chair conformations of a) *trans*-1,2-dimethylcyclohexane, and b) *trans*-1-isopropyl-3-methylcyclohexane. Draw all substituents on all carbons (including hydrogens), being sure that the axial or equatorial orientation is clear. Be sure to check your drawing with your instructor or tutor.

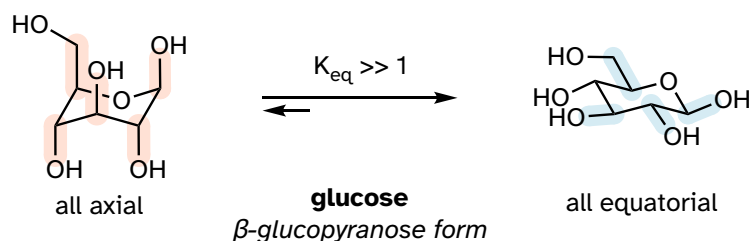
**Exercise 3.5:** Predict which of the following disubstituted hexanes has a greater energy difference between its two chair conformations, and state your reasons for your choices.

- cis*-1,3-dimethylcyclohexane or *cis*-1,4-dimethylcyclohexane
- cis*-1,2-dimethylcyclohexane or *trans*-1,2-dimethylcyclohexane
- trans*-1,2-dimethylcyclohexane or *trans*-1-isopropyl-2-methylcyclohexane

**Exercise 3.6:** Can a 'ring inversion' change a *cis*-disubstituted cyclohexane to *trans*? Explain.

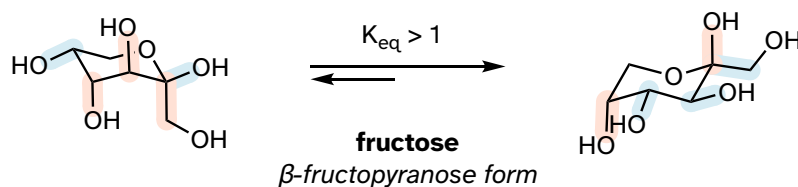
Recall that five- and six-carbon sugars such as glucose and fructose exist in solution in open chain and cyclic forms. Glucose, in its most abundant form in solution, is a six-membered ring adopting a chair conformation with all substituents equatorial.

3.2.13



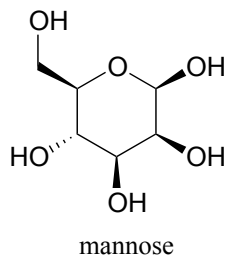
The most abundant form of fructose in aqueous solution is also a six-membered ring.

3.2.14



The lower energy chair conformation is the one with three of the five substituents (including the bulky  $-\text{CH}_2\text{OH}$  group) in the equatorial position.

**Exercise 3.7:** Draw the two chair conformations of the six-carbon sugar mannose, being sure to clearly show each non-hydrogen substituent as axial or equatorial. Predict which conformation is likely to be more stable and explain why.



[Video tutorial: conformations of cyclohexane](#)

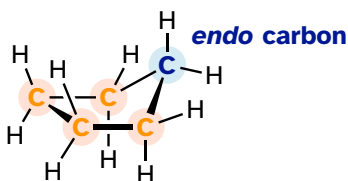
The lowest energy conformation of cyclopentane and other five-membered rings is known as the 'envelope', with four of the ring atoms in the same plane and one out of plane (notice that this shape resembles an envelope with the flap open). The out-of-plane carbon is said to be in the **endo** position ('endo' means 'inside').

3.2.15

---

**"Envelope" Conformation of Cyclopentane**

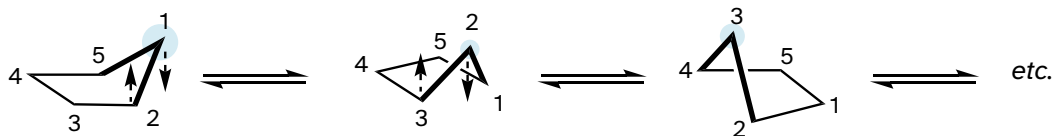
---



The 'equatorial' vs 'axial' distinction discussed in the context of 6-membered rings does not apply to five-membered rings.

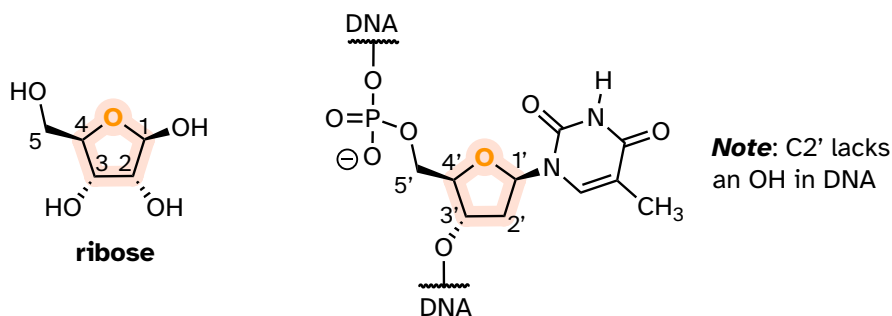
At room temperature, cyclopentane undergoes a rapid **pseudorotation** process in which each of the five carbons takes turns being in the *endo* position.

3.2.16



One of the most important five-membered rings in nature is a sugar called ribose – recall from section 1.3E that DNA and RNA are both constructed upon 'backbones' derived from ribose. Pictured below is one thymidine (T) deoxy nucleotide from a stretch of DNA:

3.2.17



The lowest-energy conformations for ribose are envelope forms in which either the 3' or 2' carbons are *endo*. This has particularly important implications for oligonucleotide structure – in a DNA double helix, it is C2 that is in the *endo* position, while in RNA it is C3.

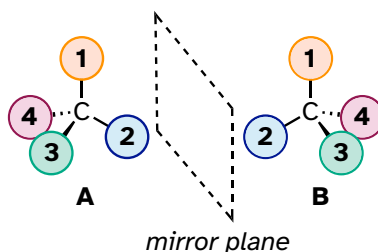
### Section 3.3: Chirality and stereoisomers

We turn now to the concept of chirality that formed the basis of the story about Louis Pasteur in the beginning of this chapter. Recall that the term **chiral**, from the Greek work for 'hand', refers to anything which cannot be superimposed on its own mirror image. Your hands, of course, are chiral - you cannot superimpose your left hand on your right, and you cannot fit your left hand into a right-handed glove (which is also a chiral object). Another way of saying this is that your hands do not have a **mirror plane of symmetry**: you cannot find any plane which bisects your hand in such a way that one side of the plane is a mirror image of the other side. *Chiral objects do not have a plane of symmetry.*

Your face is **achiral** - lacking chirality - because some small deviations notwithstanding, you could superimpose your face onto its mirror image. If someone were to show you a mirror image photograph of your face, you could line the image up, point-for-point, with your actual face. Your face has a plane of symmetry because the left side is the mirror image of the right side.

What Pasteur, Biot, and their contemporaries did not yet fully understand when Pasteur made his discovery of molecular chirality was the *source* of chirality at the molecular level. It made sense that a chiral molecule is one that does not contain a plane of symmetry, and thus cannot be superimposed on its mirror image. We now know that chiral molecules contain one or more **stereocenters**, which are almost always tetrahedral ( $sp^3$ -hybridized) carbons with four different substituents. Consider the cartoon molecule A below: a tetrahedral carbon, with four different substituents denoted by balls of four different colors (for the time being, don't worry about exactly what these substituents could be - we will see real examples very soon).

## 3.3.1

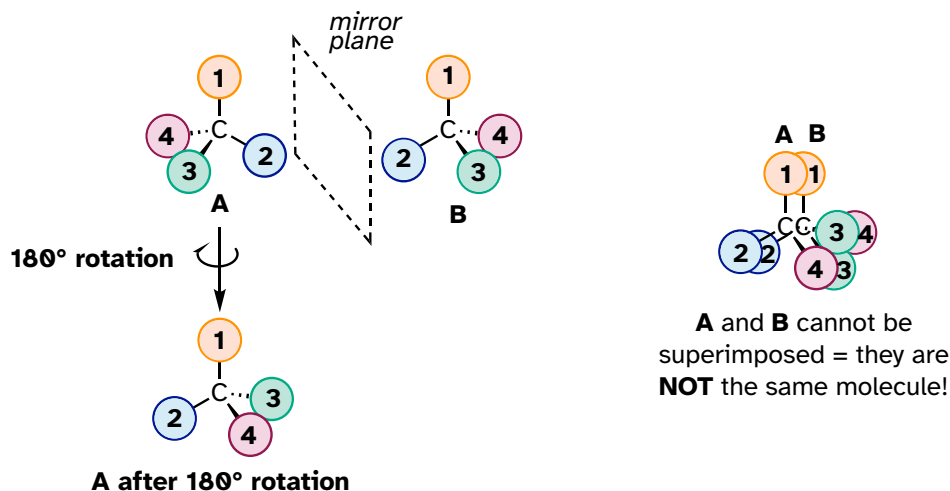


[another image](#)

The mirror image of A, which we will call B, is drawn on the right side of the figure, and an imaginary mirror is in the middle. Notice that every point on A lines up through the mirror with the same point on B: in other words, if A looked in the mirror, it would see B looking back.

Now, if we flip compound A over and try to superimpose it point for point on compound B, we find that we cannot do it: if we superimpose any two-colored balls, then the other two are misaligned.

## 3.3.2



A is not superimposable on its mirror image (B), thus by definition A is a chiral molecule. It follows that B also is not superimposable on *its* mirror image (A), and thus it is also a chiral molecule. Also notice in the figure below (and convince yourself with models) that neither A nor B has an internal plane of symmetry.

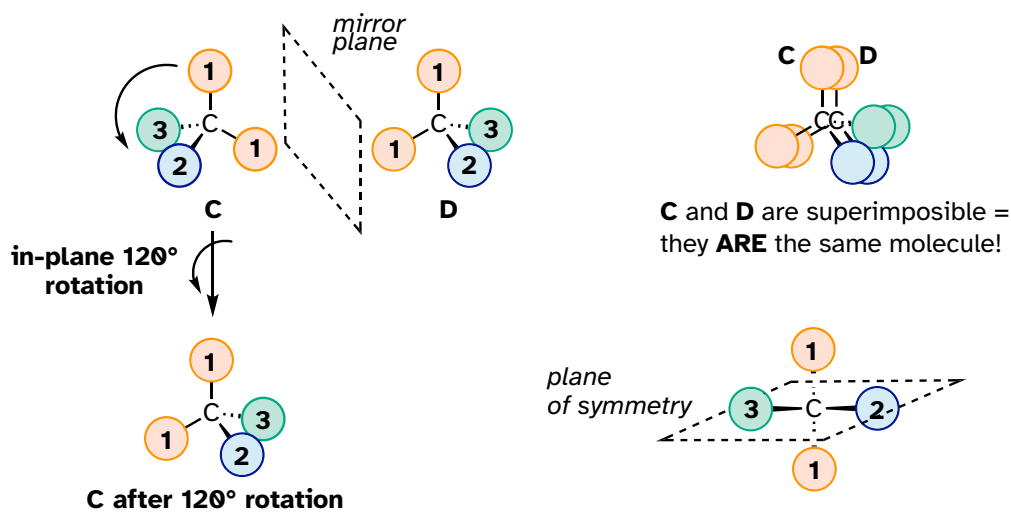
A and B are **stereoisomers**: molecules with the same molecular formula and the same bonding arrangement, but a *different arrangement of atoms in space*. There are two types of stereoisomers: enantiomers and diastereomers. **Enantiomers** are pairs of stereoisomers which are mirror images of each other: thus, A and B are

enantiomers. It should be self-evident that a chiral molecule will always have one (and *only* one) enantiomer: enantiomers come in pairs. Enantiomers have identical physical properties (melting point, boiling point, density, and so on). However, enantiomers do differ in how they interact with polarized light (we will learn more about this soon) and they may also interact in very different ways with other chiral molecules - proteins, for example. We will begin to explore this last idea later in this chapter and see many examples throughout the remainder of our study of biological organic chemistry.

**Diastereomers** are stereoisomers which are *not* mirror images of each other. For now, we will concentrate on understanding enantiomers, and come back to diastereomers later.

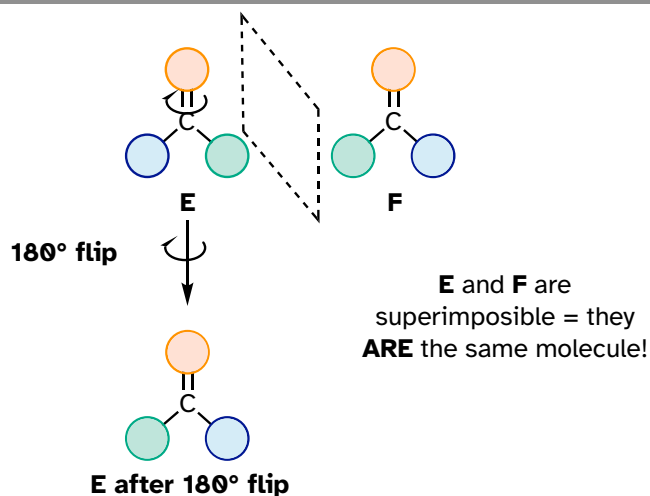
We defined a stereocenter as a tetrahedral carbon with four different substituents. If, instead, a tetrahedral carbon has two identical substituents (two orange atoms in the cartoon figure below), then of course it still has a mirror image (*everything* has a mirror image, unless we are talking about a vampire!) However, it is superimposable on its mirror image, and has a plane of symmetry.

## 3.3.3



This molecule is **achiral** (lacking chirality). Using the same reasoning, we can see that a trigonal planar ( $sp^2$ -hybridized) carbon is also not a stereocenter.

## 3.3.4

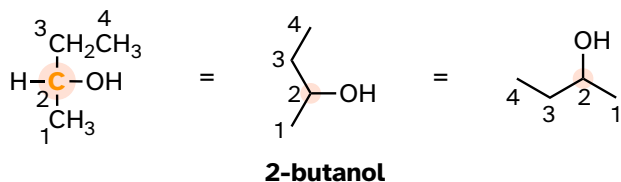


Notice that structure E can be superimposed on F, its mirror image - all you must do is pick E up, flip it over, and it is the same as F. This molecule has a plane of symmetry and is achiral.

Let's apply our general discussion to real molecules. For now, we will limit our discussion to molecules with a single stereocenter. It turns out that tartaric acid, the subject of our chapter introduction, has *two* stereocenters, so we will come back to it later.

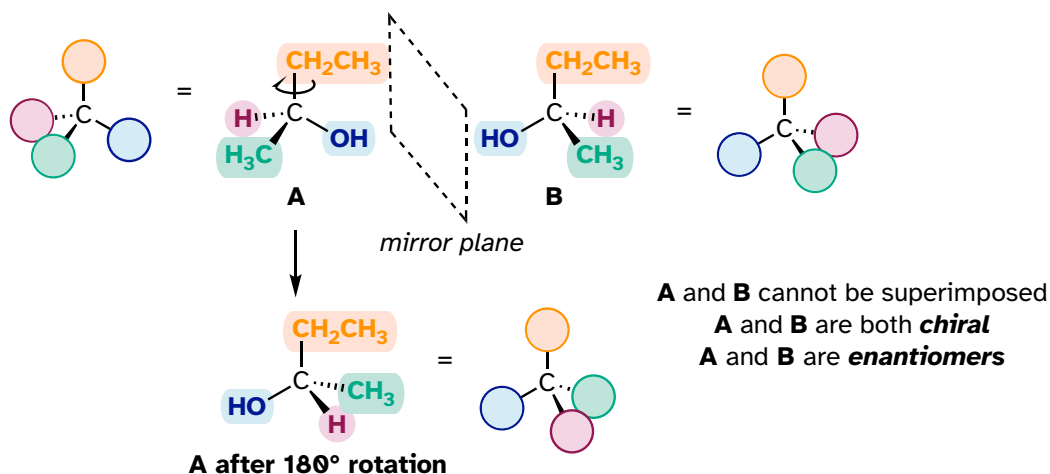
Consider 2-butanol, drawn in two dimensions below.

## 3.3.5



Carbon #2 is a stereocenter: it is  $sp^3$ -hybridized and tetrahedral (even though it is not drawn that way above), and the four things attached to it are different: a hydrogen, a methyl ( $-CH_3$ ) group, an ethyl ( $-CH_2CH_3$ ) group, and a hydroxyl (OH) group. Let's draw the bonding at C#2 in three dimensions, and call this structure A. We will also draw the mirror image of A, and call this structure B.

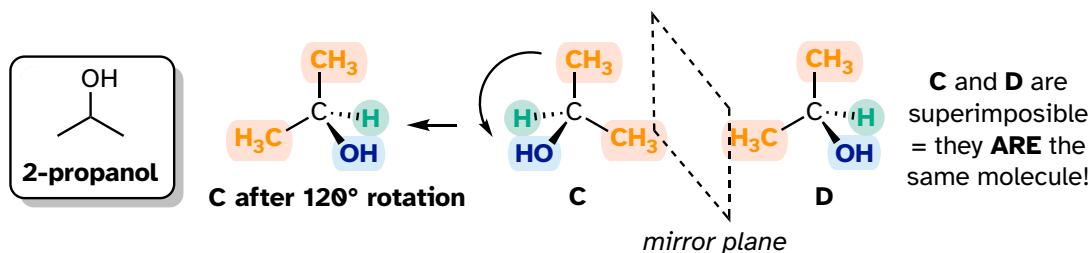
## 3.3.6



When we try to superimpose A onto B, we find that we cannot do it. A and B are both chiral molecules, and they are enantiomers of each other.

2-Propanol, unlike 2-butanol, is *not* a chiral molecule. Carbon #2 is bonded to two identical substituents (methyl groups), and so it is not a stereocenter.

## 3.3.7



Notice that 2-propanol is superimposable on its own mirror image.

When we look at very simple molecules like 2-butanol, it is not difficult to draw out the mirror image and recognize that it is not superimposable. However, with larger, more complex molecules, this can be a daunting challenge in terms of drawing and three-dimensional visualization. The easy way to determine if a molecule is chiral is simply to look for the presence of one or more stereocenters: molecules with stereocenters will (almost always) be chiral. We insert the 'almost always' caveat here because it is possible to come up with the exception to this rule - we will have more to say on this later, but don't worry about it for now.

Here's another trick to make your stereochemical life easier: if you want to draw the enantiomer of a chiral molecule, it is not necessary to go to the trouble of drawing the point-for-point mirror image, as we have done up to now for purposes of illustration. Instead, keep the carbon skeleton the same, and simply reverse the



solid and dashed wedge bonds on the chiral carbon: that accomplishes the same thing. You should use models to convince yourself that this is true, and to convince yourself that swapping *any two substituents* about the chiral carbon will result in the formation of the enantiomer.

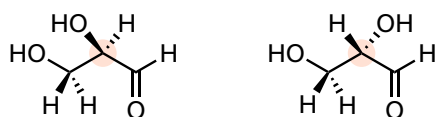
## 3.3.8



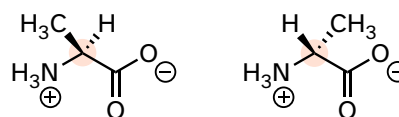
2 enantiomers of 2-butanol

Here are four more examples of chiral biomolecules, each one shown as a pair of enantiomers, with stereocenters highlighted.

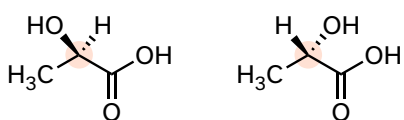
## 3.3.9



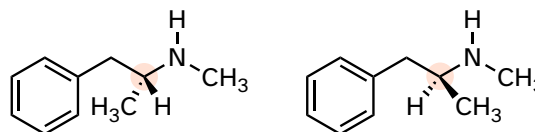
glyceraldehyde



alanine



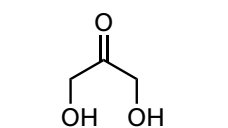
lactic acid



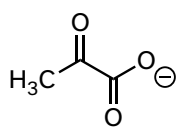
methamphetamine

Here are some examples of achiral biomolecules - convince yourself that none of them contains a stereocenter:

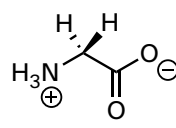
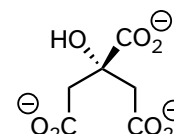
## 3.3.10



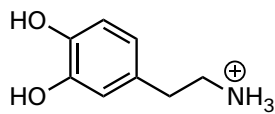
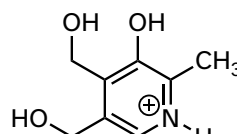
dihydroxyacetone



pyruvate

glycine  
an amino acid

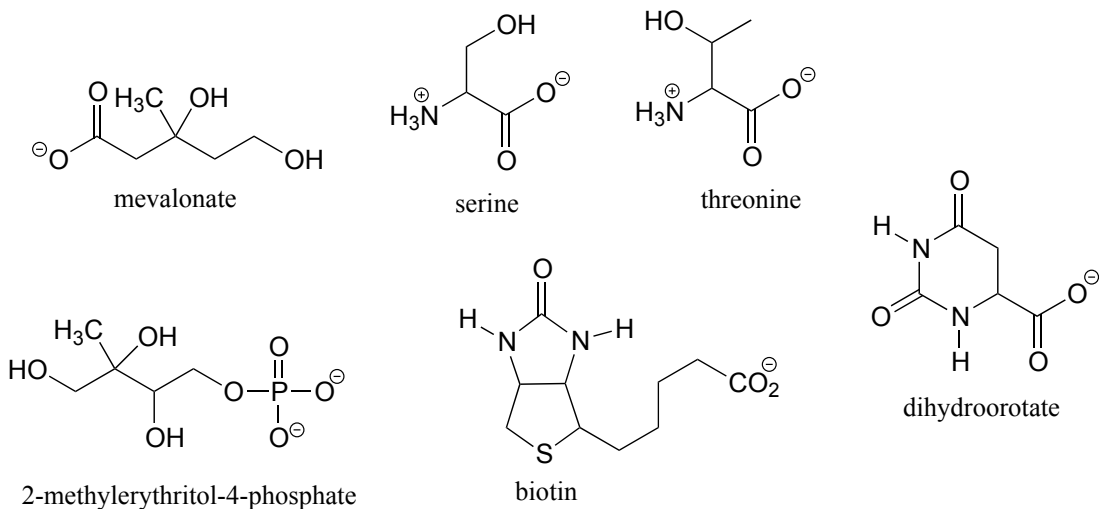
citrate

dopamine  
a neurotransmitterpyridoxine  
vitamin B<sub>6</sub>

When looking for stereocenters, it is important to recognize that the question of whether the dashed/solid wedge drawing convention is used is irrelevant. Chiral molecules are sometimes drawn without using wedges (although obviously, this




## Chapter 3: Conformation and Stereochemistry



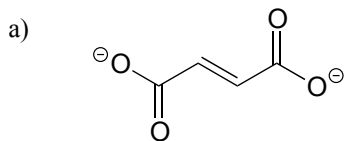
### Exercise 3.9:

a) Draw two enantiomers of i) mevalonate and ii) serine.

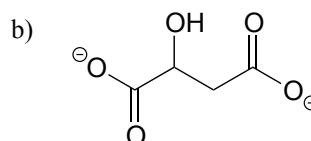
b) Are the two 2-butanol structures below enantiomers?



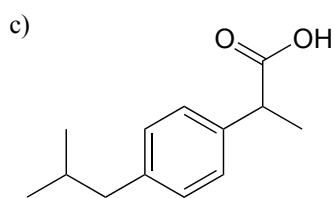
**Exercise 3.10:** Label the molecules below as chiral or achiral and locate all stereocenters.



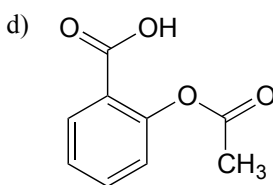
fumarate  
(a citric acid cycle intermediate)



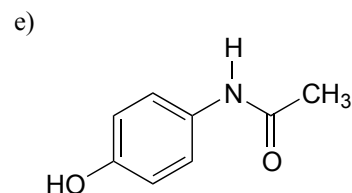
malate  
(a citric acid cycle intermediate)



ibuprofen



acetylsalicylic acid  
(aspirin)



acetaminophen  
(active ingredient in Tylenol)

[Video tutorials: chirality](#)  
[Video tutorials: enantiomers](#)

### Section 3.4: Labeling stereocenters

Chemists need a convenient way to distinguish one stereoisomer from another. The **Cahn-Ingold-Prelog system** is a set of rules that allows us to unambiguously define the stereochemical configuration of any stereocenter, using the designations '**R**' (from the Latin *rectus*, meaning right-handed) or '**S**' (from the Latin *sinister*, meaning left-handed).

The rules for this system of stereochemical nomenclature are, on the surface, simple.

#### Rules for assigning an R/S designation to a stereocenter:

1: Assign priorities to the four substituents, with #1 being the highest priority and #4 the lowest. Priorities are based on the atomic number.

2: Trace a circle from #1 to #2 to #3.

3: Determine the orientation of the #4 priority group. If it is oriented into the plane of the page (away from you), go to step 4a. If it is oriented out of the plane of the page (toward you) go to step 4b.

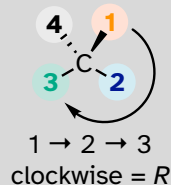
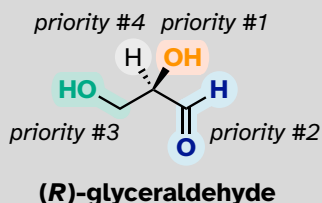
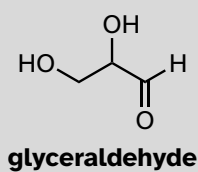
4a: (*#4 group pointing away from you*): a clockwise circle in part 2 corresponds to the *R* configuration, while a counterclockwise circle corresponds to the *S* configuration.

4b: (*#4 group pointing toward you*): a clockwise circle in part 2 corresponds to the *S* configuration, while a counterclockwise circle corresponds to the *R* configuration.

We'll use the 3-carbon sugar glyceraldehyde as our first example. The first thing that we must do is to assign **priority** to each of the four substituents bound to the stereocenter. We first look at the atoms that are directly bonded to the stereocenter: these are H, O (in the hydroxyl), C (in the aldehyde), and C (in the CH<sub>2</sub>OH group).

#### Assigning R/S configuration to glyceraldehyde

3.4.1



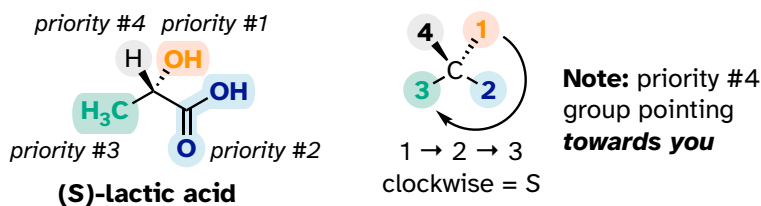
**Note:** priority #4 group pointing *away from you*

Two priorities are easy: hydrogen, with an atomic number of 1, is the lowest (#4) priority, and the hydroxyl oxygen, with atomic number 8, is priority #1. Carbon has an atomic number of 6. Which of the two 'C' groups is priority #2, the aldehyde or the CH<sub>2</sub>OH? To determine this, we move one more bond away from the stereocenter: for the aldehyde we have a *double* bond to an oxygen atom, while on the CH<sub>2</sub>OH group we have a *single* bond to an oxygen atom. If the atom is the same, double bonds have a higher priority than single bonds. Therefore, the aldehyde group is assigned #2 priority and the CH<sub>2</sub>OH group the #3 priority.

With our priorities assigned, we look next at the #4 priority group (the hydrogen) and see that it is pointed back away from us, into the plane of the page - thus step 4a from the procedure above applies. Then, we trace a circle defined by the #1, #2, and #3 priority groups, in increasing order. The circle is clockwise, which by step 4a tells us that this carbon has the '*R*' configuration, and that this molecule is (*R*)-glyceraldehyde. Its enantiomer, by definition, must be (*S*)-glyceraldehyde.

Next, let's look at one of the enantiomers of lactic acid and determine the configuration of the stereocenter. Clearly, H is the #4 substituent and OH is #1. Owing to its three bonds to oxygen, the carbon on the acid group takes priority #2, and the methyl group takes #3. The #4 group, hydrogen, happens to be drawn pointing *toward* us (out of the plane of the page) in this figure, so we use step 4b: The circle traced from #1 to #2 to #3 is clockwise, which means that the stereocenter has the *S* configuration.

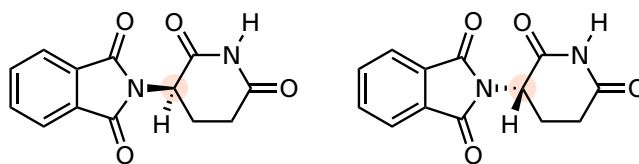
## 3.4.2



[Interactive model: \(\*S\*\)-alanine](#)  
[Video tutorial: Cahn-Ingold-Prelog \(\*R/S\*\) naming system](#)

The drug thalidomide is an interesting - but tragic - case study in the importance of stereochemistry in drug design. First manufactured by a German drug company and prescribed widely in Europe and Australia in the late 1950's as a sedative and remedy for morning sickness in pregnant women, thalidomide was soon implicated as the cause of devastating birth defects in babies born to women who had taken it. Thalidomide contains a stereocenter, and thus exists in two enantiomeric forms. It was marketed as a **racemic mixture**: in other words, a 50:50 mixture of both enantiomers.

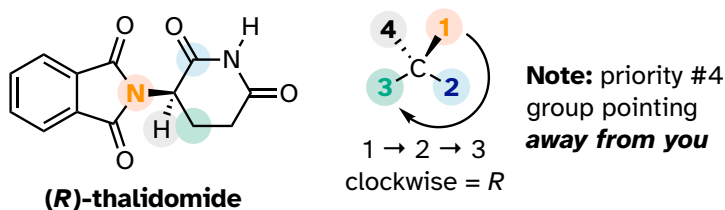
## 3.4.3



2 enantiomers of thalidomide

Let's try to determine the stereochemical configuration of the enantiomer on the left. Of the four bonds to the stereocenter, the #4 priority is hydrogen. The nitrogen group is #1, the carbonyl side of the ring is #2, and the  $-\text{CH}_2$  side of the ring is #3.

## 3.4.4



The hydrogen is shown pointing away from us, and the prioritized substituents trace a clockwise circle: this is the *R* enantiomer of thalidomide. The other enantiomer, of course, must have the *S* configuration.

[Interactive model of \(S\)-thalidomide](#)

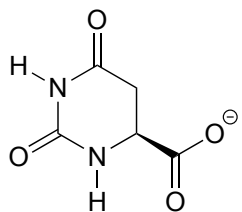
Although scientists are still unsure today how thalidomide works, experimental evidence suggests that it was the *R* enantiomer that had the desired medical effects, while the *S* enantiomer caused the birth defects. Even with this knowledge, however, pure (*R*)-thalidomide is not safe, because enzymes in the body rapidly convert between the two enantiomers - we will see how that happens in chapter 12.

As a historical note, thalidomide was never approved for use in the United States. This was thanks in large part to the efforts of [Dr. Frances Kelsey](#), a Food and Drug officer who, at peril to her career, blocked its approval due to her concerns about the lack of adequate safety studies, particularly regarding the drug's ability to enter the bloodstream of a developing fetus. Unfortunately, though, at that time clinical trials for new drugs involved widespread and unregulated distribution to doctors and their patients across the country, so families in the U.S. were not spared from the damage caused.

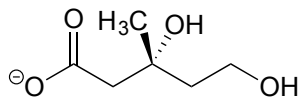
Very recently a close derivative of thalidomide has become legal to prescribe again in the United States, with strict safety measures enforced, for the treatment of a form of blood cancer called multiple myeloma. In Brazil, thalidomide is used in the

treatment of leprosy - but despite safety measures, children are still being born with thalidomide-related defects.

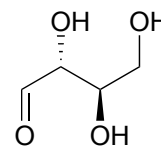
**Exercise 3.11:** Determine the stereochemical configurations of the stereocenters in the biomolecules shown below.



dihydroorotate

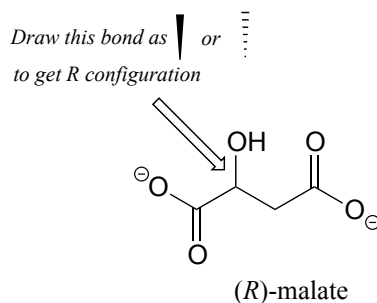


mevalonate



(D)-erythrose

**Exercise 3.12:** Should the (*R*) enantiomer of malate have a solid or dashed wedge for the C-O bond in the figure below?

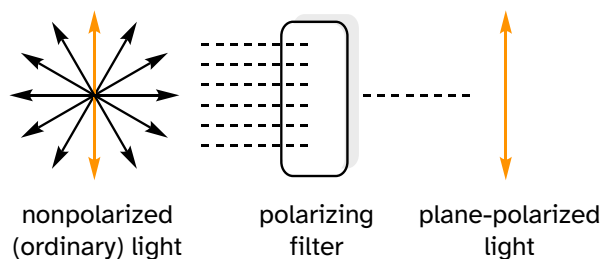


**Exercise 3.13:** Using solid or dashed wedges to show stereochemistry, draw the (*R*) enantiomer of ibuprofen and the (*S*) enantiomer of 2-methylerythritol-4-phosphate (structures are shown earlier in this chapter without stereochemistry).

### Section 3.5: Optical activity

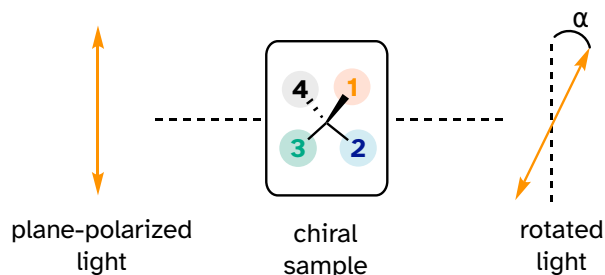
Chiral molecules, as we learned in the introduction to this chapter, have an interesting optical property. You may know from studying physics that light waves are oscillating electric and magnetic fields. In ordinary light, the oscillation is randomly oriented in an infinite number of planes. When ordinary light is passed through a polarizer, all planes of oscillation are filtered out except one, resulting in **plane-polarized light**.

## 3.5.1



A beam of plane-polarized light, when passed through a sample of a chiral compound, interacts with the compound in such a way that the angle of oscillation will rotate. This property is called **optical activity**.

## 3.5.2



[another image](#)

If a compound rotates plane polarized light in the clockwise (+) direction, it is said to be **dextrorotatory**, while if it rotates light in the counterclockwise (-) direction it is **levorotatory**. The magnitude of the observed optical activity is dependent on temperature, the wavelength of light used, solvent, the concentration of the chiral sample, and the path length of the sample tube (path length is the length that the plane-polarized light travels through the chiral sample). Typically, optical activity measurements are made in a 1 decimeter (10 cm) path-length sample tube at 25 °C, using as a light source the so-called “D-line” from a sodium lamp, which has a wavelength of 589 nm. The **specific rotation**  $[\alpha]$  of a pure chiral compound at 25° is expressed by the expression:

specific rotation:

$$[\alpha]_{\text{D}}^{25} = \frac{\alpha_{\text{obs}}}{lc}$$

. . . where  $\alpha_{\text{obs}}$  is the observed rotation,  $l$  is path length in decimeters, and  $c$  is the concentration of the sample in grams per 100 mL. In other words, the specific rotation of a chiral compound is the optical rotation that is observed when 1g of the

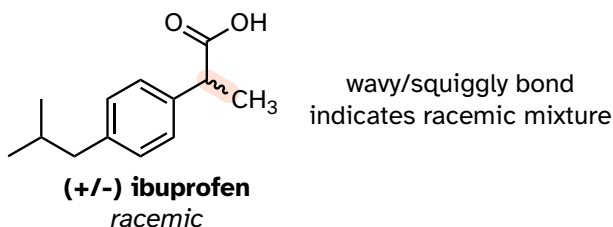


compound is dissolved in enough of a given solvent to make 100 mL solution, and the rotation is measured in a 1 dm cuvette at 25°C using light from a sodium lamp.

Every chiral molecule has a characteristic specific rotation, which is recorded in the chemical literature as a physical property just like melting point or density. Different enantiomers of a compound will always rotate plane-polarized light with an equal but opposite magnitude. (*S*)-ibuprofen, for example, has a specific rotation of +54.5° (dextrorotatory) in methanol, while (*R*)-ibuprofen has a specific rotation of -54.5°. *There is no relationship between chiral compound's R/S designation and the direction of its specific rotation.* For example, the *S* enantiomer of ibuprofen is dextrorotatory, but the *S* enantiomer of glyceraldehyde is levorotatory.

A 50:50 mixture of two enantiomers (a racemic mixture) will have no observable optical activity because the two optical activities cancel each other out. In a structural drawing, a 'wavy' (or 'squiggly') bond from a stereocenter indicates a mixture of both *R* and *S* configurations.

## 3.5.3



Chiral molecules are often labeled according to whether they are dextrorotatory or levorotatory as well as by their *R/S* designation. For example, the pure enantiomers of ibuprofen are labeled (*S*)-(+)-ibuprofen and (*R*)-(-)-ibuprofen, while (±)-ibuprofen refers to the racemic mixture, which is the form in which the drug is sold to consumers.

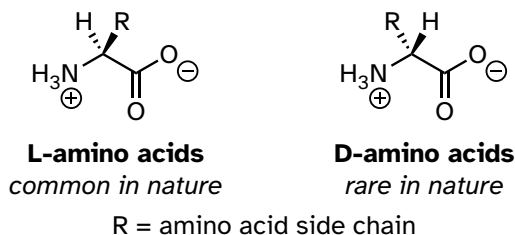
[Video tutorial: optical activity](#)

**Exercise 3.14:** The specific rotation of (*R*)-limonene is +11.5° in ethanol. What is the expected observed rotation of a sample of 6.00 g (*S*)-limonene dissolved in ethanol to a total volume of 80.0 mL in a 1.00 dm (10.0 cm) pathlength cuvette?

**Exercise 3.15:** The specific rotation of (*S*)-carvone is +61°, measured 'neat' (pure liquid sample, no solvent). The optical rotation of a mixture of *R* and *S* carvone is measured at -23°. Which enantiomer is in excess in the mixture?

All the twenty natural amino acids except glycine have a stereocenter at their  $\alpha$ -carbon (recall that basic amino acid structure and terminology were introduced in section 1.3D). The most common 19 amino acids found in nature, both in the form of free amino acids or incorporated into peptides and proteins, are referred to in the biochemical literature as the 'L' configuration:

## 3.5.4



The 'L' designation is based on the compound's absolute configuration relative to L- glyceraldehyde. Notice that the designation 'L' does not necessarily correspond to a levorotatory behavior. In fact, nine of the nineteen L-amino acids naturally occurring in proteins are dextrorotary despite the L- prefix. All but one of the 19 common L-amino acids have S stereochemistry at the  $\alpha$ -carbon, using the rules of the *R/S* naming system.

[Interactive model: \(S\)-alanine](#)

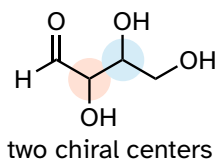
D-amino acids are relatively rare in nature, but we will learn about an interesting example of a peptide containing one D-amino acid residue later in chapter 12.

**Exercise 3.16:** Which L-amino acid has the *R* configuration? Use Table 5 at the end of the book to refer to the structures of all 20 common amino acids.

### Section 3.6: Compounds with multiple stereocenters

So far, we have been analyzing compounds with a single stereocenter. Next, we turn our attention to those which have multiple stereocenters. We'll start with some stereoisomeric four-carbon sugars with two stereocenters.

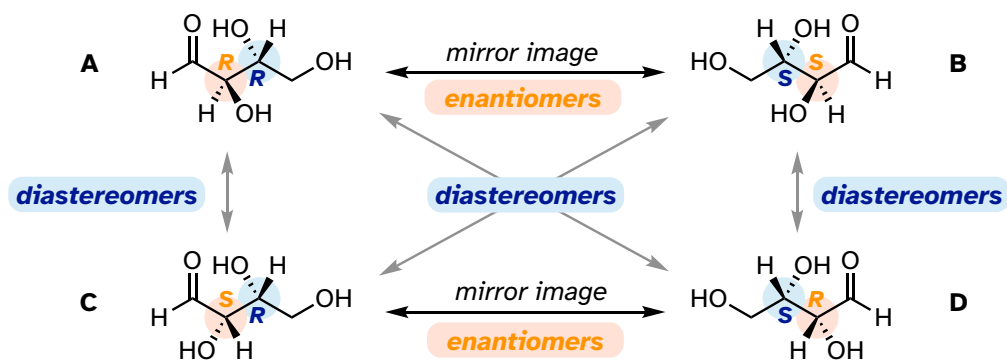
## 3.6.1



To avoid confusion, we will simply refer to the different stereoisomers by capital letters.

Look first at compound A, below. Both stereocenters in have the *R* configuration (you should confirm this for yourself!). The mirror image of Compound A is compound B, which has the *S* configuration at both stereocenters. If we were to pick up compound A, flip it over, and put it next to compound B, we would see that they are *not* superimposable (again, confirm this for yourself with your models!). A and B are non-superimposable mirror images: in other words, enantiomers.

## 3.6.2



Now, look at compound C, in which the configuration is *S* at stereocenter 1 and *R* at stereocenter 2. Compounds A and C are stereoisomers: they have the same molecular formula and the same bond connectivity, but a different arrangement of atoms in space (recall that this is the definition of the term 'stereoisomer'). However, they are *not* mirror images of each other (confirm this with your models!), and so they are *not* enantiomers. They are **diastereomers** of each other.

Notice that compounds C and B also have a diastereomeric relationship, by the same definition.

So, compounds A and B are a pair of enantiomers, and compound C is a diastereomer of both of them. Does compound C have its own enantiomer? Compound D is the mirror image of compound C, and the two are not superimposable. Therefore, C and D are a pair of enantiomers. Compound D is also a diastereomer of compounds A and B.

This can also seem very confusing at first, but there are some simple shortcuts to analyzing stereoisomers:

### Stereoisomer shortcuts

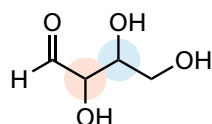
If **all** the stereocenters are of opposite *R/S* configuration between two stereoisomers, they are enantiomers.

If **at least one, but not all** the stereocenters are opposite between two stereoisomers, they are diastereomers.

(Note: these shortcuts do not consider the possibility of additional stereoisomers due to alkene groups: we will come to that later)

Here's another way of looking at the four stereoisomers, where one stereocenter is associated with red and the other blue. Pairs of enantiomers are stacked together.

## 3.6.3



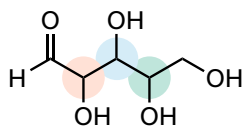
With 2 chiral centers, there are 4 possible configurations:

<b>RR</b>	<b>RS</b>
<b>SS</b>	<b>SR</b>

We know, using the shortcut above, that the enantiomer of **RR** must be **SS** - both stereocenters are different. We also know that **RS** and **SR** are diastereomers of **RR**, because in each case one - but not both - stereocenters are different.

Now, let's extend our analysis to a sugar molecule with three stereocenters. Going through all the possible combinations, we come up with eight total stereoisomers - four pairs of enantiomers.

## 3.6.4

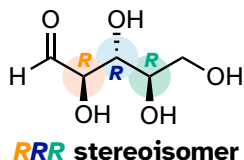


With 3 chiral centers, there are 8 possible configurations:

<b>RRR</b>	<b>RRS</b>	<b>RSR</b>	<b>RSS</b>
<b>SSS</b>	<b>SSR</b>	<b>SRS</b>	<b>SRR</b>

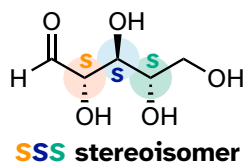
Let's draw the **RRR** stereoisomer. Being careful to draw the wedge bonds correctly so that they match the **RRR** configurations, we get:

## 3.6.5



Now, using the above drawing as our model, drawing any other stereoisomer is easy. If we want to draw the enantiomer of **RRR**, we don't need to try to visualize the mirror image, we just start with the **RRR** structure and invert the configuration at *every* stereocenter to get **SSS**.

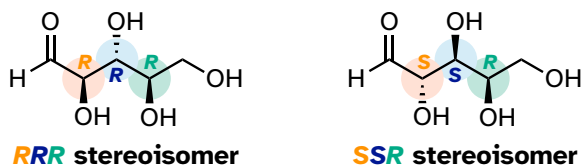
## 3.6.6



Try making models of *RRR* and *SSS* and confirm that they are in fact nonsuperimposable mirror images of each other.

There are six diastereomers of *RRR*. To draw one of them, we just invert the configuration of at least one, but not all three, of the stereocenters. Let's invert the configuration at stereocenter 1 and 2, but leave stereocenter 3 unchanged. This gives us the *SSR* configuration.

## 3.6.7

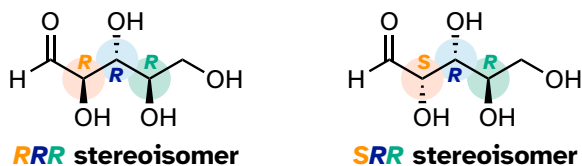


**diastereomers**

*2 chiral centers changed, 1 chiral center stayed the same*

One more definition at this point: diastereomers which differ at only a single stereocenter are called **epimers**. For example, *RRR* and *SRR* are epimers:

## 3.6.8



**diastereomers (epimers)**

*1 chiral center changed, 2 chiral centers stayed the same*

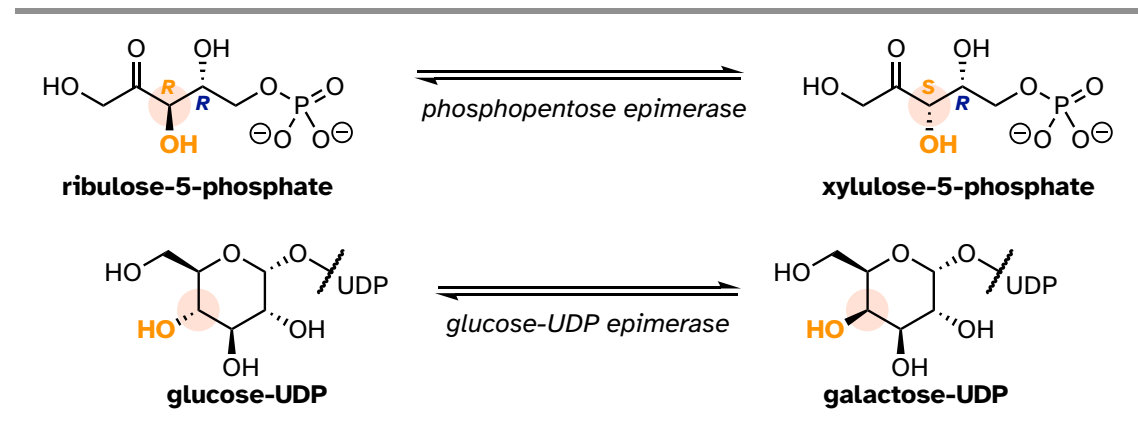
The *RRR* and *SSR* stereoisomers shown earlier are diastereomers but *not* epimers because they differ at *two* of the three stereocenters.

Exercise 3.17:

- a) Draw the structure of the *enantiomer* of the **SRS** stereoisomer of the sugar used in the previous example.
- b) List (using the **XXX** format, not drawing the structures) all the epimers of **SRS**.
- c) List all of the stereoisomers that are diastereomers, but not epimers, of **SRS**.

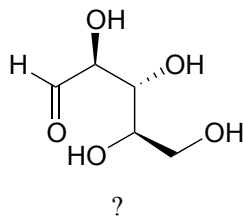
The epimer term is useful because in biochemical pathways, compounds with multiple stereocenters are isomerized at one specific center by enzymes known as **epimerases**. Two examples of epimerase-catalyzed reactions are below.

## 3.6.9



We know that enantiomers have identical physical properties, and equal but opposite magnitude specific rotation. Diastereomers, in theory at least, have *different* physical properties – we stipulate ‘in theory’ because sometimes the physical properties of two or more diastereomers are so similar that it is very difficult to distinguish between them. In addition, the specific rotation values of diastereomers are unrelated – they could be the same sign or opposite signs, similar in magnitude or very dissimilar.

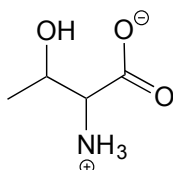
Exercise 3.18: The sugar below is one of the stereoisomers that we have been discussing.



But it is drawn with the carbon backbone in a different orientation from what we have seen. Determine the configuration at each stereocenter to determine which stereoisomer it is.

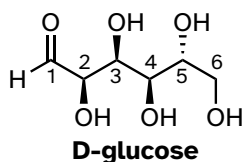
**Exercise 3.19:** Draw the enantiomer of the xylulose-5-phosphate structure in the previous figure.

**Exercise 3.20:** The structure of the amino acid L-allothreonine, drawn without stereochemistry, is shown below. L-allothreonine has the (*S*) configuration at both of its stereocenters. Draw L-allothreonine, its enantiomer and its two diastereomers.



Here is some more practice in identifying isomeric relationships. D-glucose is the monosaccharide that serves as the entrance point for the glycolysis pathway and as a building block for the carbohydrate biopolymers starch and cellulose. The 'D' in D-glucose is part of the specialized nomenclature system for sugars, which we will not concern ourselves with here. The open-chain structure of the sugar is shown below.

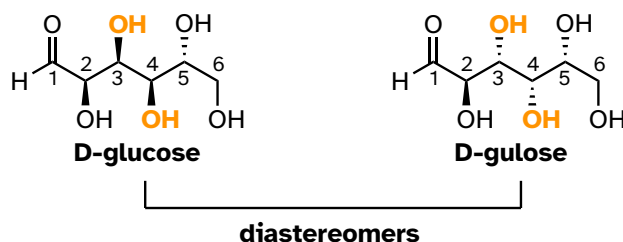
3.6.10



Because D-glucose has four stereocenters, it can exist in a total of  $2^4 = 16$  different stereoisomeric forms: it has one enantiomer and 14 diastereomers.

Now, let's compare the structures of the two sugars D-glucose and D-gulose, and try to determine their relationship.

3.6.11

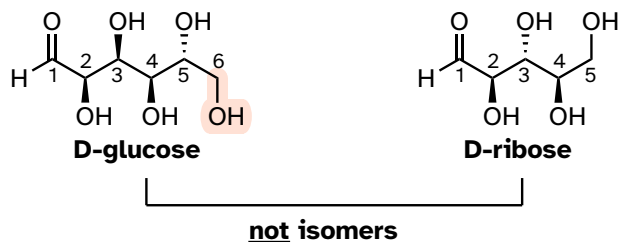




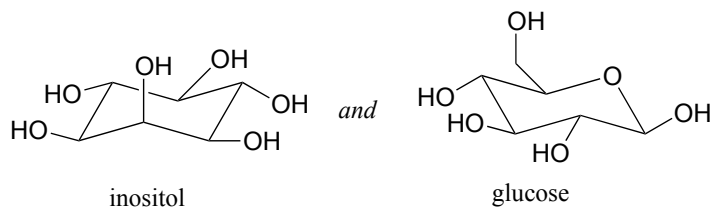
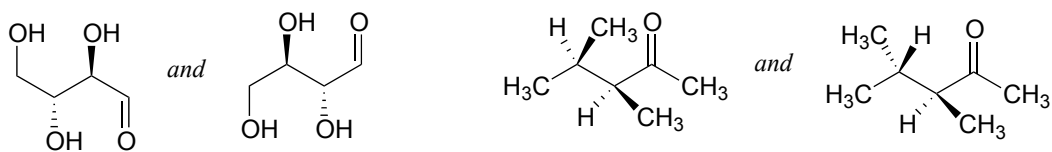
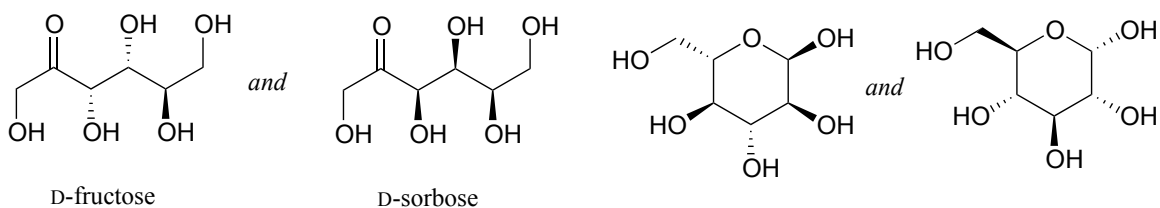


D-glucose and D-ribose are not isomers of any kind, because they have different molecular formulas.

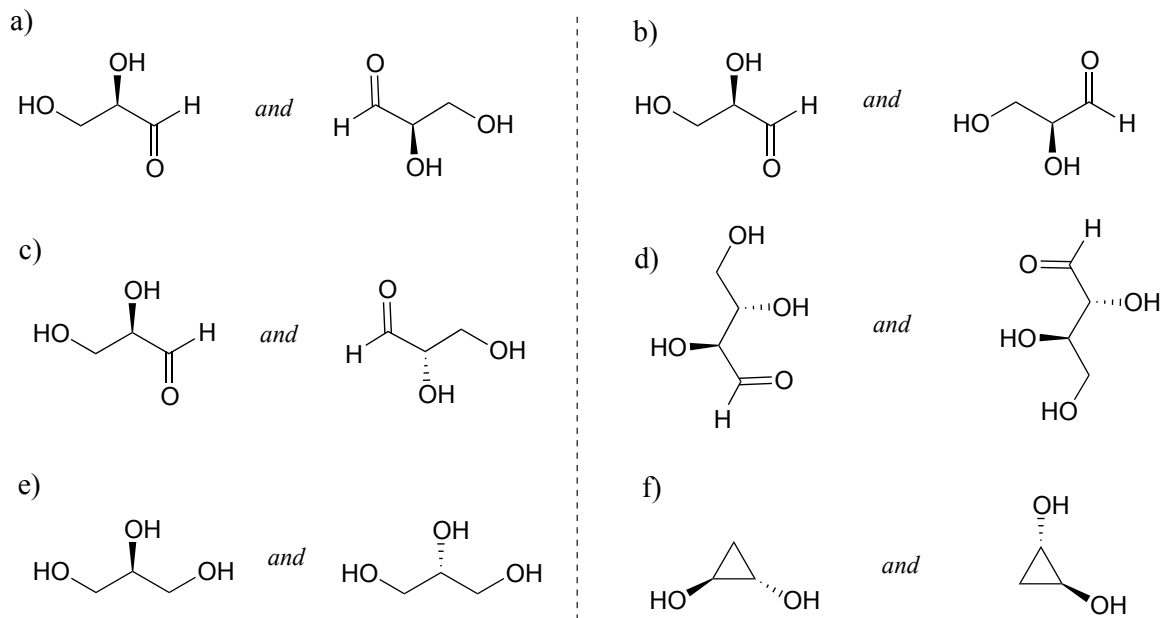
3.6.15



**Exercise 3.21:** Identify the relationship between each pair of structures. Your choices are: not isomers, constitutional isomers, diastereomers but not epimers, epimers, enantiomers, or same molecule.



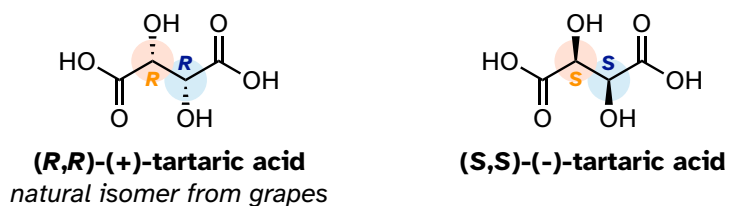
**Exercise 3.22:** Identify the relationship between each pair of structures. *Hint* - figure out the configuration of each stereocenter.



### Section 3.7: Meso compounds

The levorotatory and dextrorotatory forms of tartaric acid studied by Louis Pasteur were, as we now know, the (*S,S*) and (*R,R*) enantiomers, respectively:

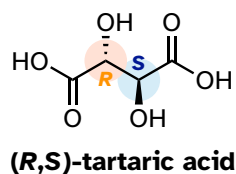
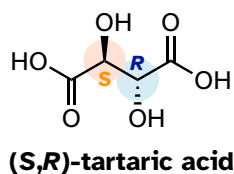
3.7.1



What the 19th century chemists referred to as '*acide racémique*' was just that: a racemic mixture of the *R,R* and *S,S* enantiomers, the racemization a result of how the natural *R,R* isomer had been processed.

But tartaric acid has two stereocenters: shouldn't there be another pair of enantiomers?

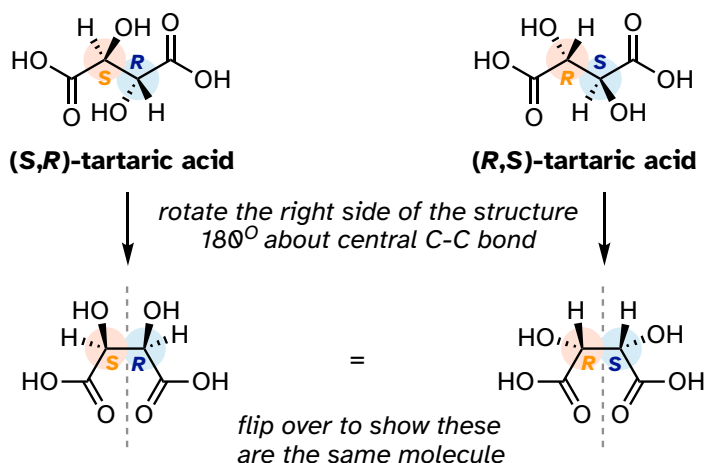
## 3.7.2



[interactive model](#)

There in fact is another stereoisomer of tartaric acid: *but only one*. The two structures above are superimposable on one another: they are the exact same molecule. The figure below illustrates this, and that the structure has a plane of symmetry. However, you should be sure to build models and confirm these assertions for yourself.

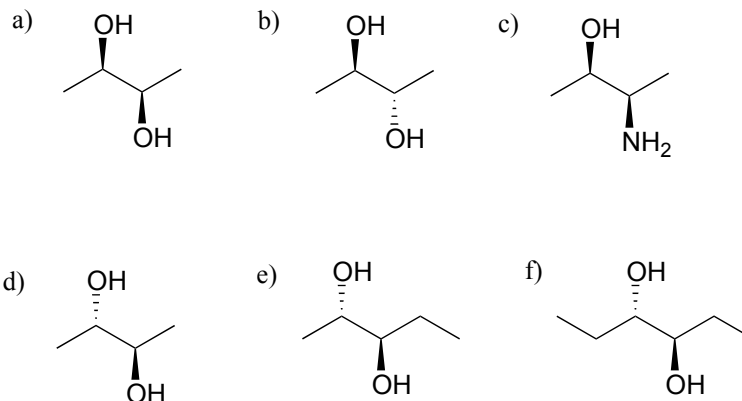
## 3.7.3



This tartaric acid isomer is an *achiral* diastereomer of both the levorotatory and dextrorotatory isomers. It is a special case, called a **meso** compound: it has two apparent stereocenters but due to its internal symmetry it is not in fact chiral, and does not exhibit optical activity. Note that the *meso* form of tartaric acid did not play a part in Pasteur's experiments.

There are many more possible examples of *meso* compounds, but they really can be considered 'exceptions to the rule' and quite rare in biologically relevant chemistry.

**Exercise 3.23:** Which of the following compounds are *meso*? Hint: build models, and then try to find a conformation in which you can see a plane of symmetry.



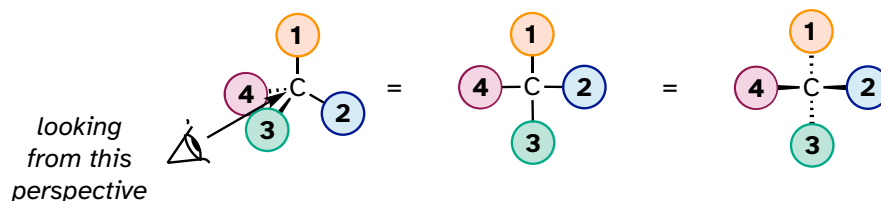
[Video tutorial: stereoisomeric relationships](#)

### Section 3.8: Fischer and Haworth projections

When reading the chemical and biochemical literature, you are likely to encounter several different conventions for drawing molecules in three dimensions, depending on the context of the discussion. While organic chemists prefer to use the dashed/solid wedge convention to show stereochemistry, biochemists often use drawings called **Fischer projections** and **Haworth projections** to discuss and compare the structure of sugar molecules.

Fischer projections show sugars in their open chain form. In a Fischer projection, the carbon atoms of a sugar molecule are connected vertically by solid lines, while carbon-oxygen and carbon-hydrogen bonds are shown horizontally. Stereochemical information is conveyed by a simple rule: vertical bonds point into the plane of the page, while horizontal bonds point out of the page.

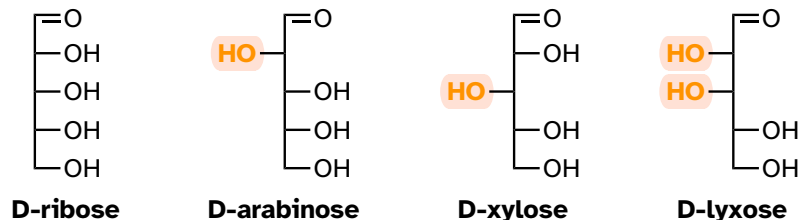
#### 3.8.1





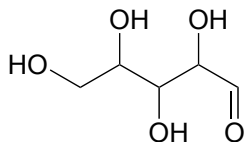
Fischer projections are useful when looking at many different diastereomeric sugar structures, because the eye can quickly pick out stereochemical differences according to whether a hydroxyl group is on the left or right side of the structure.

## 3.8.5



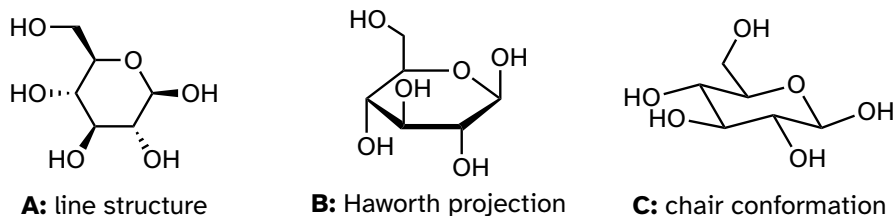
[Video tutorial: Fischer projections](#)

**Exercise 3.24:** Draw 'zigzag' structures (using the solid/dash wedge convention to show stereochemistry) for the four sugars in the figure above. Label all stereocenters *R* or *S*. To make it easy to check your answers, draw your structures using the framework below.



While Fischer projections are used for sugars in their open-chain form, Haworth projections are often used to depict sugars in their cyclic forms. The  $\beta$  diastereomer of the cyclic form of glucose is shown below in three different depictions, with the Haworth projection in the middle.

## 3.8.6




Notice that although a Haworth projection is a convenient way to show stereochemistry, it does not provide a realistic depiction of conformation. To show *both* conformation and stereochemistry, you must draw the ring in the chair form, as in structure C above.

### Section 3.9: Stereochemistry of alkenes

When we talk about stereochemistry, we are not always talking about chiral compounds and stereocenters. Consider *cis*- and *trans*-2-butene:

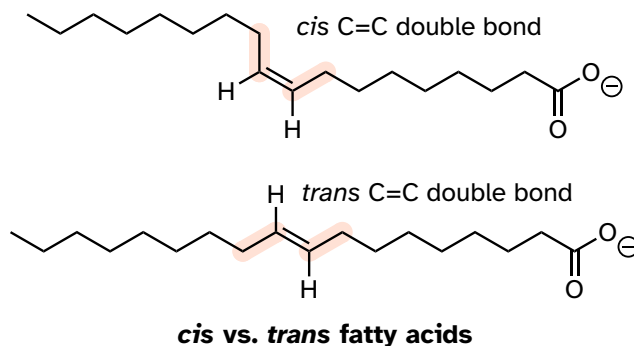
3.9.1



Each can be superimposed on its own mirror image, and neither is chiral (also, note the lack of a stereocenter!) However, they both have the same molecular formula and the same bonding connectivity, so by definition they are stereoisomers of each other. Because they are not mirror images, they must be diastereomers. An alkene group which can exist in two stereoisomeric forms is referred to as **stereogenic**.

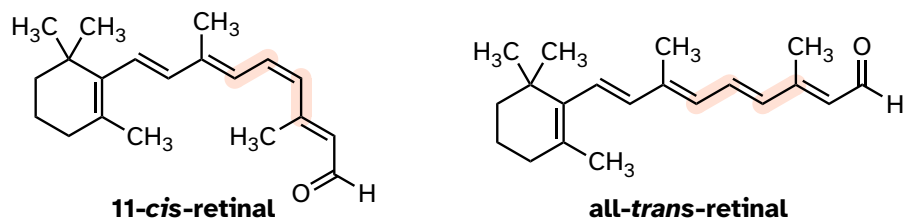
Alkene groups in natural unsaturated fatty acids are normally *cis*, but *trans*-fatty acids (which are thought to be associated with heart disease and other health problems) are found in some food products.

3.9.2



Retinal is a light-sensitive molecule, derived from vitamin A, that is found in the rod cells of the eye. When light enters the eye through the retina, one form of retinal is converted to a diastereomer when a *cis* double bond is converted to *trans* (we'll learn how this happens in a future chapter). This changes the shape of the molecule and the way that it binds to the vision protein rhodopsin, which in turn initiates a chain of events that leads to a signal being sent to the vision center of the brain.

## 3.9.3

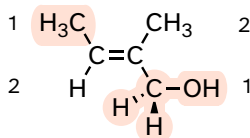


While the terms *cis* and *trans* are quite clear in the examples above, in some cases they can be ambiguous, and a more rigorous stereochemical designation is required. To unambiguously designate alkene stereochemistry, it is best to use the designators '*E*' and '*Z*' rather than *trans* and *cis*. To use this naming system, we first decide which is the higher priority group on each carbon of the double bond, using the same priority rules that we learned for the *R/S* system. If the higher-priority groups are on the same side of the double bond, it is a *Z*-alkene, and if they are on the opposite side it is an *E*-alkene. A memory device that many students find helpful is the phrase '*Z* = *zame zide*'.

Shown below is an example of an *E*-alkene: notice that, although the two methyl groups are on the same side relative to one another, the alkene has *E* stereochemistry according to the rules of the *E/Z* system because one of the methyl groups takes a higher priority (relative to a hydrogen) and the other takes lower priority (relative to a primary alcohol). The *cis/trans* terms would be ambiguous for this compound.

## 3.9.4

left carbon is substituted with  
-CH<sub>3</sub> and -H  
- the methyl group is higher  
priority



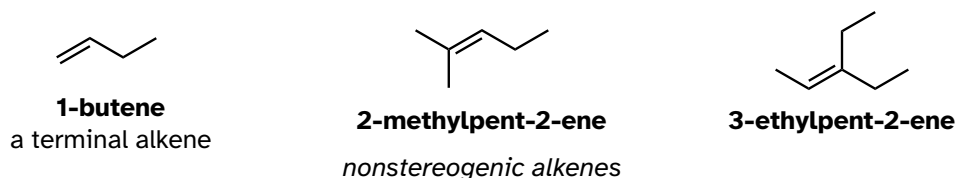
right carbon is substituted  
with -CH<sub>3</sub> and -CH<sub>2</sub>OH  
- the -CH<sub>2</sub>OH group is  
higher priority

**the higher priority groups of C=C are opposite to each other  
therefore an *E*-alkene**

Not all alkenes can be labeled *E* or *Z*: if one (or both) of the double-bonded carbons has identical substituents, the alkene is not stereogenic, and thus cannot be assigned an *E* or *Z* configuration. Terminal alkenes, in which one of the alkene carbons is bonded to two hydrogen atoms, are the most commonly seen type of non-stereogenic alkene.



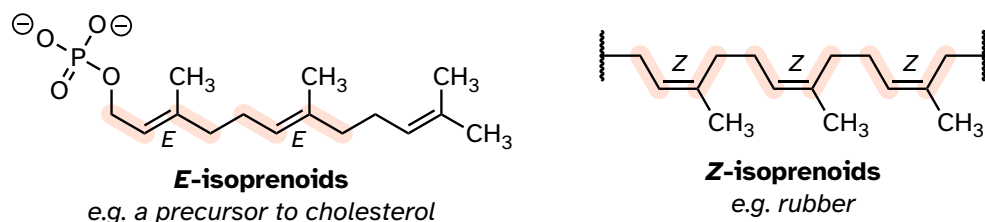
## 3.9.5



[Video tutorial: the E/Z naming for alkenes](#)

Natural rubber is a polymer composed of five-carbon isoprenoid building blocks (see section 1.3A) linked with *Z* stereochemistry. The same isoprenoid building blocks can also be connected with *E* stereochemistry, leading to a polymer that is a precursor to cholesterol and many other natural isoprenoid compounds found in all forms of life.

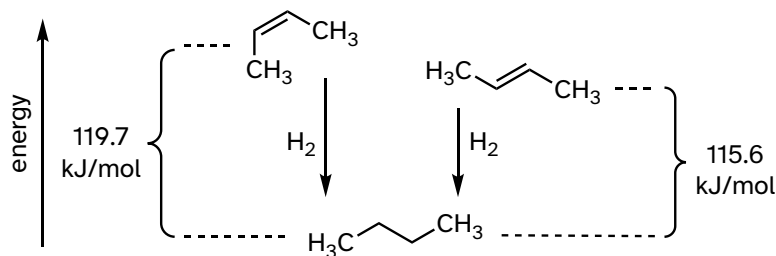
## 3.9.6



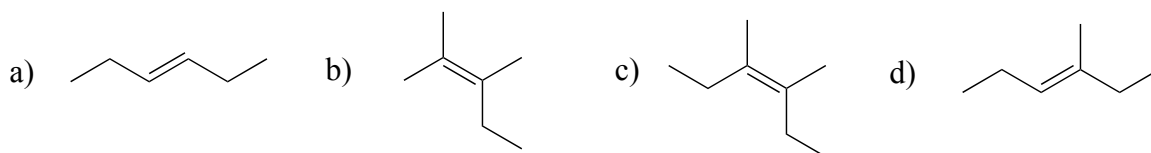
Alkenes located inside a five- or six-membered ring, such as in cyclohexene, are not generally labeled *E* or *Z*, simply because the closed geometry of the ring allows for only one stereochemical possibility. (*E*-cyclohexene is not physically possible, so it is not necessary to include the (*Z*) designator for cyclohexene. Larger rings, however, can hypothetically have *E* or *Z* alkene groups: two actual examples are included in exercise 3.26 below.

As a rule, alkenes with the bulkiest groups on opposite sides of the double bond are more stable, due to reduced steric strain. The *trans* (*E*) diastereomer of 2-butene, for example, is slightly lower in energy than the *cis* (*Z*) diastereomer, as seen by their relative heats of hydrogenation to butane (see section 2.2B for a reminder of the meaning of 'heat of hydrogenation'.)

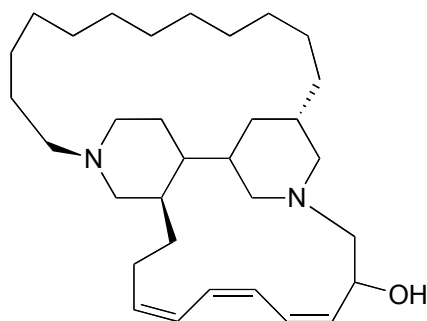
## 3.9.7



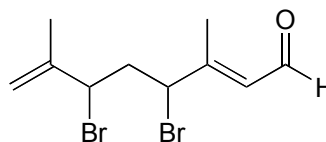
**Exercise 3.25:** Label the alkene groups below as *E*, *Z*, or *N* (for a non-stereogenic alkene).



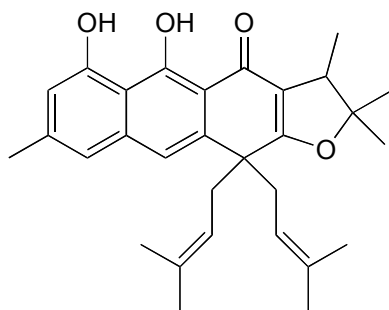
**Exercise 3.26:** The compounds shown below were all isolated from natural sources and their structures reported in a 2007 issue of the *Journal of Natural Products*, an American Chemical Society publication. Label all alkene groups that are not inside 5- or 6-membered rings as *E*, *Z*, or *N* (for a non-stereogenic alkene).



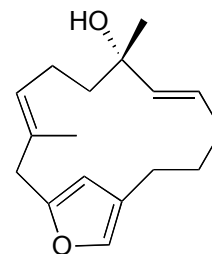
from marine sponge  
*J. Nat. Prod.* **2007**, 70, 538



from alga  
*J. Nat. Prod.* **2007**, 70, 596



from Nketto plant in Cameroon  
*J. Nat. Prod.* **2007**, 70, 600



from tree bark in Thailand  
*J. Nat. Prod.* **2007**, 70, 659

How do we know how many stereoisomers are possible for a given structure? There is a straightforward way to figure this out. All we need to do is count the number of stereocenters and stereogenic alkene groups, the use this following rule:

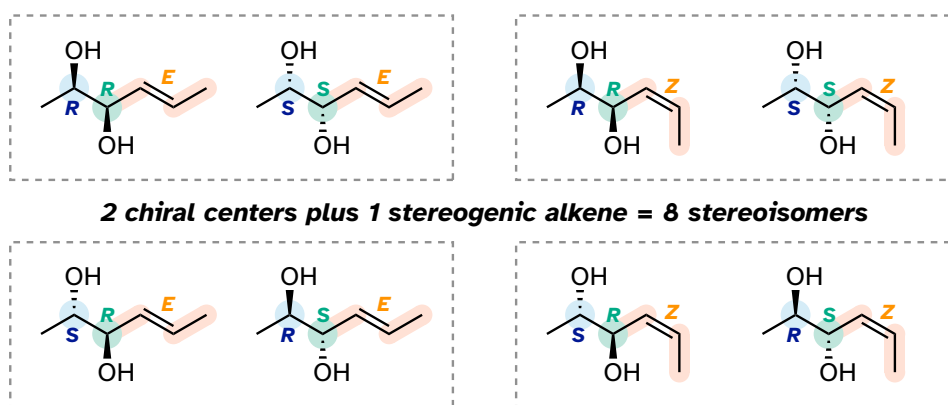
number of stereoisomeric forms =  $2^n$

. . . where  $n$  = the number of stereocenters **plus** the number of stereogenic alkene groups

(the rare exception to this rule is when a meso form is possible - in this case, the rule becomes  $2^{n-1}$ )

Consider for example a molecule with two stereocenters and one stereogenic alkene. By the rule stated above, we know right away that there must be eight possible stereoisomers. Drawing out all the possibilities, we see:


3.9.8



We see that, for example, *RRE* has one enantiomer, the *SSE* compound. The six other stereoisomers are all diastereomers of *RRE*.

It needs to be stressed that the enantiomer of the *RRE* compound is the *SSE* compound, **not** the *SSZ* compound. Remember, the *E/Z* relationship is diastereomeric, not enantiomeric. Use models to convince yourself that the *RRE* and the *SSE* isomers are mirror images of each other, while *RRE* and *SSZ* compounds are not. In general, to get the enantiomer of a compound, we invert all stereocenters *but leave all stereogenic alkenes the same*.

**Exercise 3.27:** Draw the enantiomer of each of the compounds below, and assign configurations to all stereocenters and stereogenic alkenes. How many diastereomers are possible for each of the structures you drew?

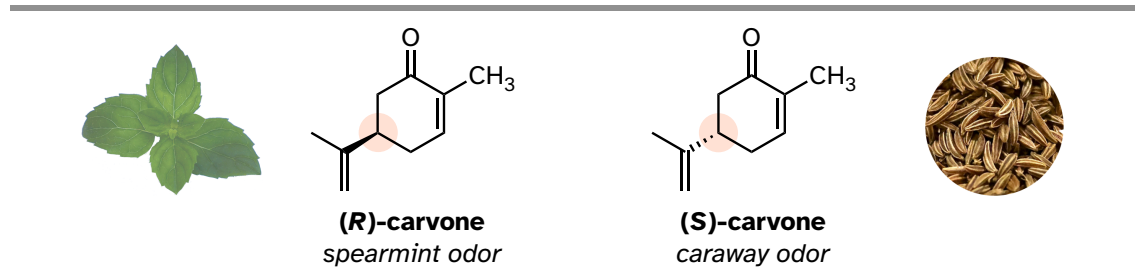




occur in her offspring which are very similar to the defects caused by the administration of thalidomide, pointing to the likelihood that thalidomide binding somehow inactivates the protein, thus initiating the teratogenic effect.

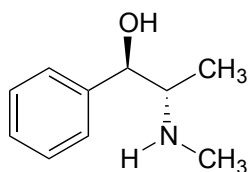
You can, with a quick trip to the grocery store, directly experience the biological importance of stereoisomerism. Carvone is a chiral, plant-derived molecule that contributes to the smell of spearmint in the *R* form and caraway (a spice) in the *S* form.

## 3.10.2

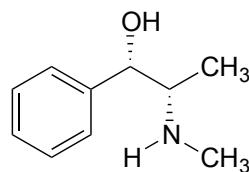


Although details are not known, the two enantiomers presumably interact differently with one or more smell receptor proteins in your nose, generating the transmission of different chemical signals to the olfactory center of your brain.

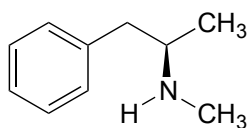
**Exercise 3.28:** Ephedrine, found in the Chinese traditional medicine *ma huang*, is a stimulant and appetite suppressant. Both pseudoephedrine and levomethamphetamine are active ingredients in over-the-counter nasal decongestants. Methamphetamine is a highly addictive and illegal stimulant and is usually prepared in illicit 'meth labs' using pseudoephedrine as a starting point.



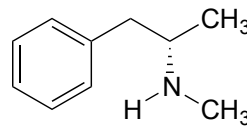
ephedrine



pseudoephedrine



methamphetamine

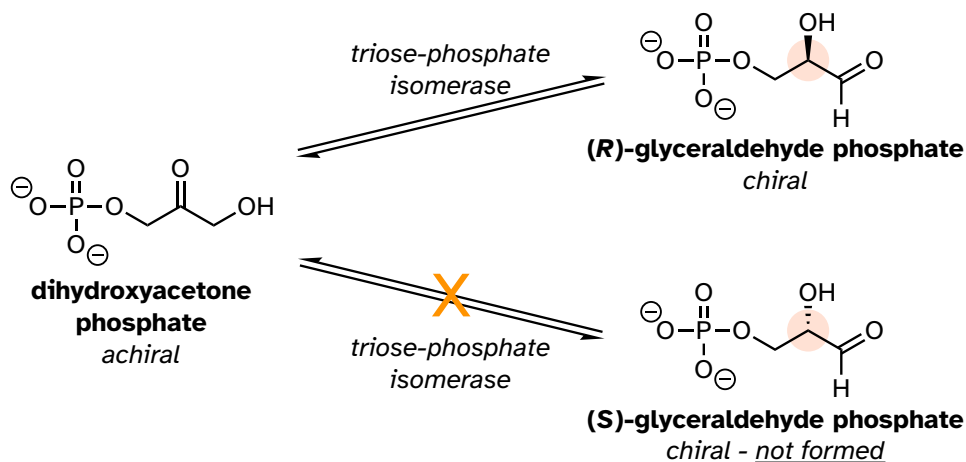


levomethamphetamine

What is the relationship between ephedrine and pseudoephedrine? Between methamphetamine and levomethamphetamine? Between pseudoephedrine and methamphetamine? Your choices are: not isomers, constitutional isomers, diastereomers, enantiomers, or same molecule.

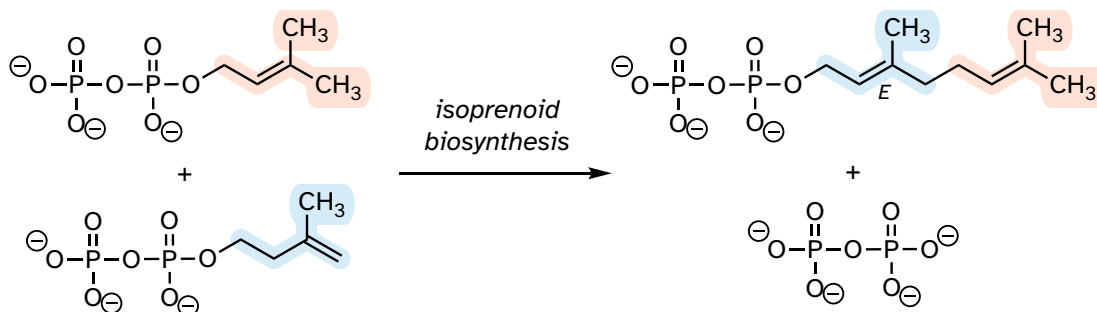
Enzymes are very specific regarding the stereochemistry of the reactions they catalyze. *When the product of a biochemical reaction contains a stereocenter or a stereogenic alkene, with very few exceptions only one stereoisomer of the product is formed.* In the glycolysis pathway, for example, the enzyme triose-phosphate isomerase catalyzes the reversible interconversion between dihydroxyacetone phosphate (which is achiral) and (*R*)-glyceraldehyde phosphate. The (*S*)-glyceraldehyde enantiomer is not formed by this enzyme in the left-to-right reaction and is not used as a starting compound in the right-to-left reaction - it does not 'fit' in the active site of the enzyme.

## 3.10.3



In the isoprenoid biosynthesis pathway, two five-carbon building-block molecules combine to form a ten-carbon chain containing an *E*-alkene group. The enzyme does *not* catalyze formation of the *Z* diastereomer.

## 3.10.4



## Chapter 3: Conformation and Stereochemistry

In chapters 9-17 of this book and continuing on into your study of biological and organic chemistry, you will be learning about how enzymes are able to achieve these feats of stereochemical specificity. If you take a more advanced class in organic synthesis, you will also learn how laboratory chemists are figuring out ingenious ways to exert control over the stereochemical outcomes of nonenzymatic reactions, an area of chemistry that is particularly important in the pharmaceutical industry.

## End of Chapter Self-Check List

Check your progress towards success. Verify that after completing this chapter you can:

### Conformations of open-chain compounds:

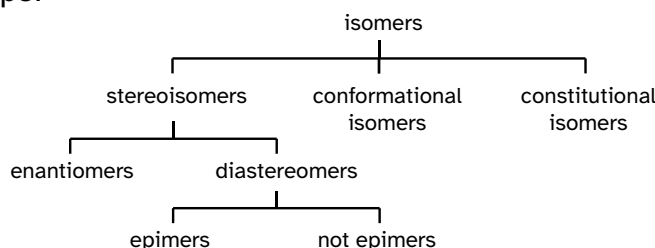
- Distinguish between **eclipsed, staggered, gauche, and anti-conformations**, and rationale the relative stability of these conformations.
- Draw and interpret **Newman projections**.

### Conformations of cyclic compounds:

- Describe the reasons for **angle strain** in 3- and 4-membered rings.
- Draw the **envelope conformation** of five-membered rings.
- Draw the **chair and boat conformations** of six-membered rings. Recognize **equatorial** and **axial** substituents.
- Recognize **1,3-diaxial repulsion** and that larger groups are more stable in the equatorial position.

### Stereochemistry:

- Define isomeric relationships according to the hierarchy of isomeric relationships.



-A **chiral** object or molecule cannot be superimposed on its mirror image.

-A **stereocenter** is an  $sp^3$ -hybridized (tetrahedral) carbon bonded to four different groups. A stereocenter can be assigned *R* or *S* configuration.

-A **stereogenic alkene** is one in which both sides of the alkene are asymmetric, and therefore be labeled as *E* or *Z*.

-**Stereoisomers** have the same molecular formula and same connectivity, but a different orientation of atoms in space.

-**Enantiomers** are stereoisomers that are mirror images.



In practice, the enantiomer of a compound is the one in which **all** stereocenters are of opposite configuration.

Every chiral molecule has one and only one enantiomer.

Achiral molecules are superimposable on their mirror image, and thus cannot have an enantiomer.

Enantiomers have equal but opposite specific rotations, but identical physical properties otherwise.

**-Diastereomers** are stereoisomers that are *not* mirror images. They have different physical properties.

In practice, a diastereomer of a chiral molecule have **at least one, but not all** stereocenters in the opposite configuration.

Alternatively, two diastereomers may contain a stereogenic alkene with the opposite *E/Z* configuration.

A molecule has  $2^n - 2$  diastereomers, where  $n$  is the number of stereocenters plus stereogenic alkene groups. *Meso* compounds are an exception to this rule.

**Epimers** are diastereomers which differ at only one stereocenter.

A **racemic mixture** is a 50:50 mixture of two enantiomers.

A **meso compound** has multiple stereocenters but because it has a plane of symmetry, is achiral.

- Recognize the isomeric relationships between given molecules.
- Convert a line-angle representation of sugars to a Fischer or Haworth projection and the other way around.
- Assign ***R/S* and *E/Z* configuration** to stereocenters and stereogenic alkenes, respectively.
- Define **optical rotation** and **specific rotation**.
- Recognize that in general, a protein can distinguish between its natural ligand and a stereoisomer of that ligand.
- Recognize that enzymes are highly stereo-specific and catalyze the formation of only one stereoisomer of possible products.
- Recognize prochiral tetrahedral carbons and identify and label *pro-R* and *pro-S* groups.

**If you didn't check off all items on this list, practice more and reach out to your instructional team for additional help.**

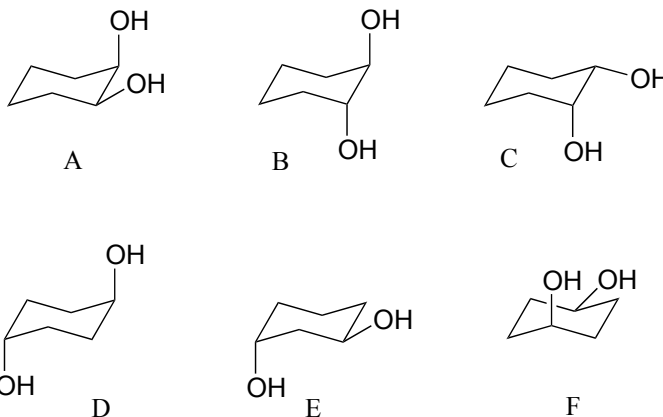
# Problems

**P3.1:** Draw an energy vs dihedral angle graph for rotations about the C<sub>2</sub>-C<sub>3</sub> bond of 2-methylbutane. Start with the highest-energy conformation as the 0° point. For each energy peak and valley, draw a corresponding Newman projection.

**P3.2:**

a) Which has the highest energy diaxial chair conformation: *trans*-1,2-dimethylcyclohexane, *cis*-1,3-dimethylcyclohexane, or *trans*-1,4-dimethylcyclohexane? Explain.

b) Which of the following are *trans* disubstituted cyclohexanes?



c) Draw A-F above in two dimensions (rings in the plane of the page, substituents drawn as solid or dashed wedges).

d) Structure D does not have any stereocenters. Explain.

e) Draw a diastereomer of structure D (in two dimensions, as in part c).

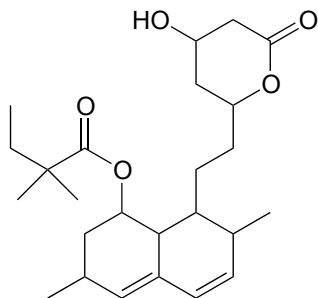
f) Are structure D and its diastereomer chiral?

g) Assign *R/S* designations to the two stereocenters in structure B (hint: making a model will be *very* helpful!)

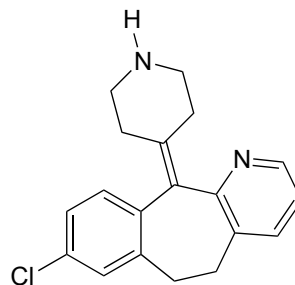
**P 3.3:** The following are structures, drawn in two dimensions, of drugs listed on the products web page of Merck Pharmaceutical. One of the compounds is achiral.

a) Circle all stereocenters. (Hint: *Don't panic!* Remember - you are looking for  $sp^3$ -hybridized carbons with four different substituents.)

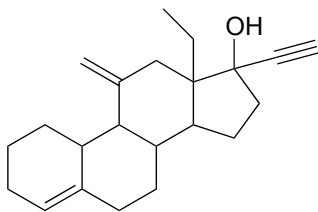
## Chapter 3: Conformation and Stereochemistry



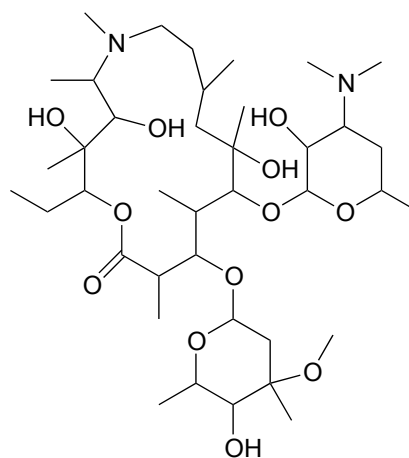
simvastatin  
(active ingredient in Zocor, for high cholesterol)



desloratadine  
(Clarinet, for seasonal allergies)



desogestrel  
(an active ingredient in Cyclessa, an oral contraceptive)

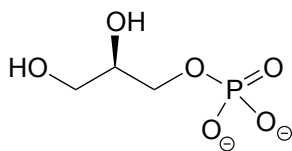


azithromycin  
(an antibiotic in AzaSite, for conjunctivitis)

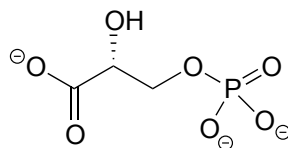
- b) How many diastereomers are possible for desogestrel?  
c) Draw two epimeric forms of simvastatin

**P3.4:** Three of the four structures below are chiral. Assign *R/S* designations to all stereocenters, and identify the achiral molecule.

## Chapter 3: Conformation and Stereochemistry

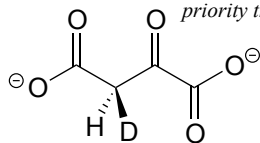


glycerol phosphate

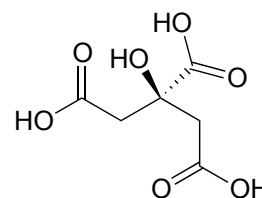


phosphoglycerate

*D = deuterium, the  $^2\text{H}$  isotope of hydrogen.  
D has a higher priority than H, lower  
priority than C.*

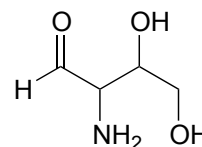
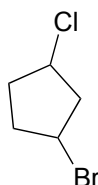
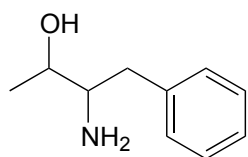


( $^2\text{H}$ )-oxaloacetate

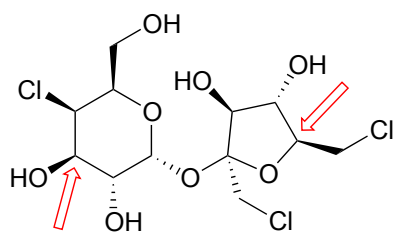


citric acid

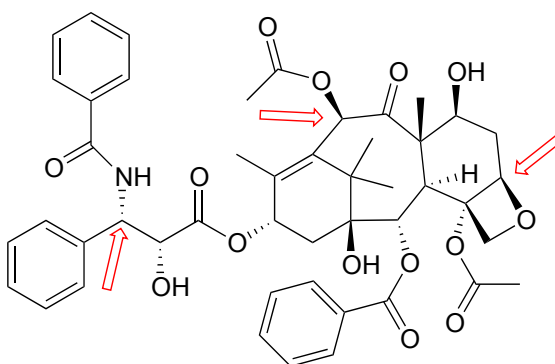
**P3.5:** Draw the *R,R* stereoisomers of the structures below.



**P3.6:** Below are the structures of sucralose, the artificial sweetener with the brand name Splenda (TM), and the cancer drug Paclitaxel. Give an *R* or *S* designation to stereocenters indicated with an arrow.



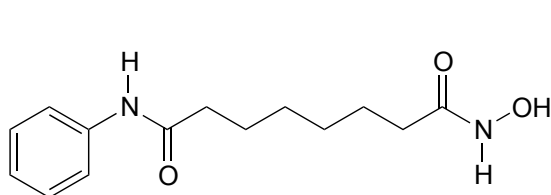
sucralose



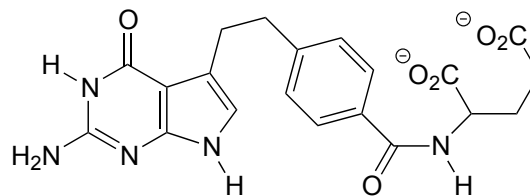
Paclitaxel

**P3.7:** The four drugs below were featured in a *Chemical & Engineering News* article (April 16, 2007, p. 42) on new drugs that had been developed in university labs.

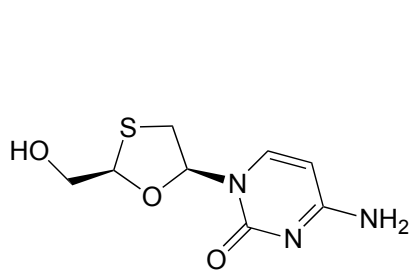
a) Identify each as chiral or achiral, and identify all stereocenters (in most cases, specific stereochemistry is not shown in the structures below). Also, state how many possible stereoisomers exist for each structure.



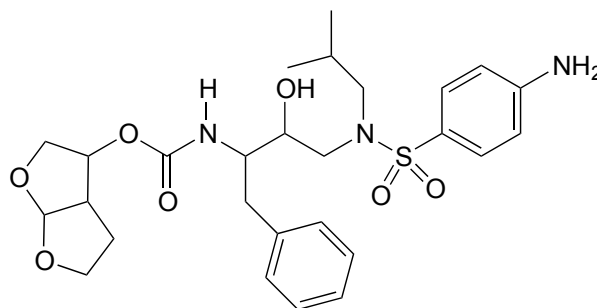
SAHA (suberoylanilide hydroxamic acid)



Alimta

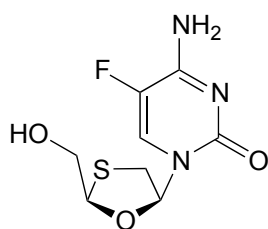


Eпивir

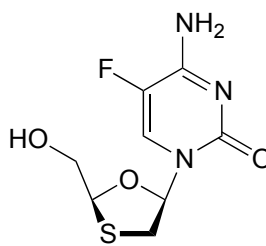


Darunavir

b) Visualization challenge: two fluorinated derivatives of Eпивir were also mentioned in the article. The structures are below, drawn in what is referred to as a 'Haworth projection'. What is the relationship between them? (Your choices: not isomers, constitutional isomers, diastereomers but not epimers, epimers, enantiomers, identical)

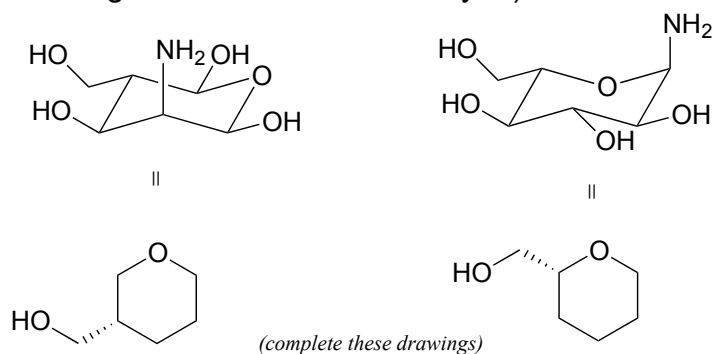


A



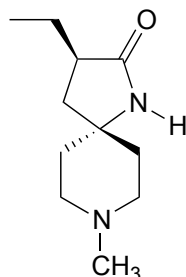
B

**P3.8:** Redraw the following structures in the flat ring, solid/dash wedge convention (the drawings have been started for you).

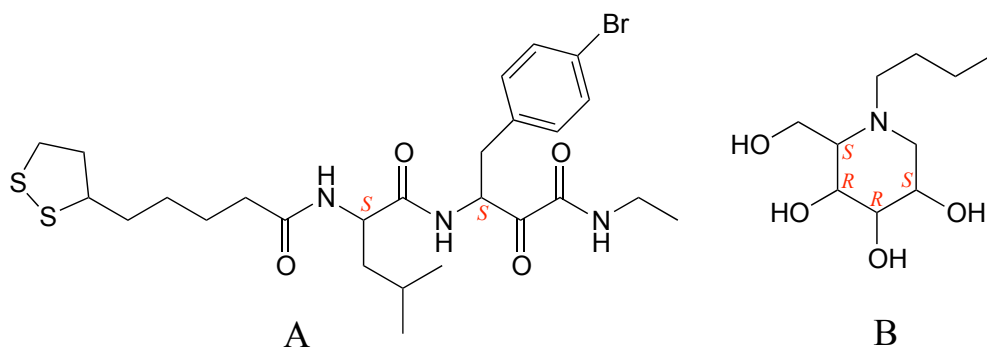


**P3.9:** Below is an experimental drug for Alzheimer's disease that was mentioned in the March 13, 2007 issue of *Chemical and Engineering News*.

- Label the stereocenter(s) *R* or *S*.
- Draw the enantiomer of the molecule shown.



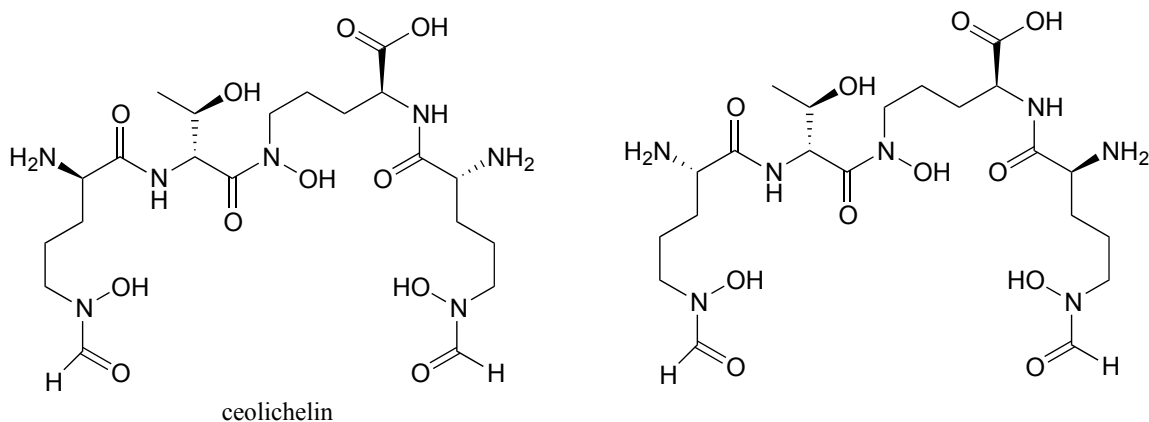
**P3.10:** The molecules below are potential new drugs for the treatment of Duchenne muscular dystrophy (molecule A) and skin cancer (molecule B) (*Chemical and Engineering News* Sept 26, 2005, p. 39). Given the *R/S* designations, redraw the structure showing the correct stereochemistry.



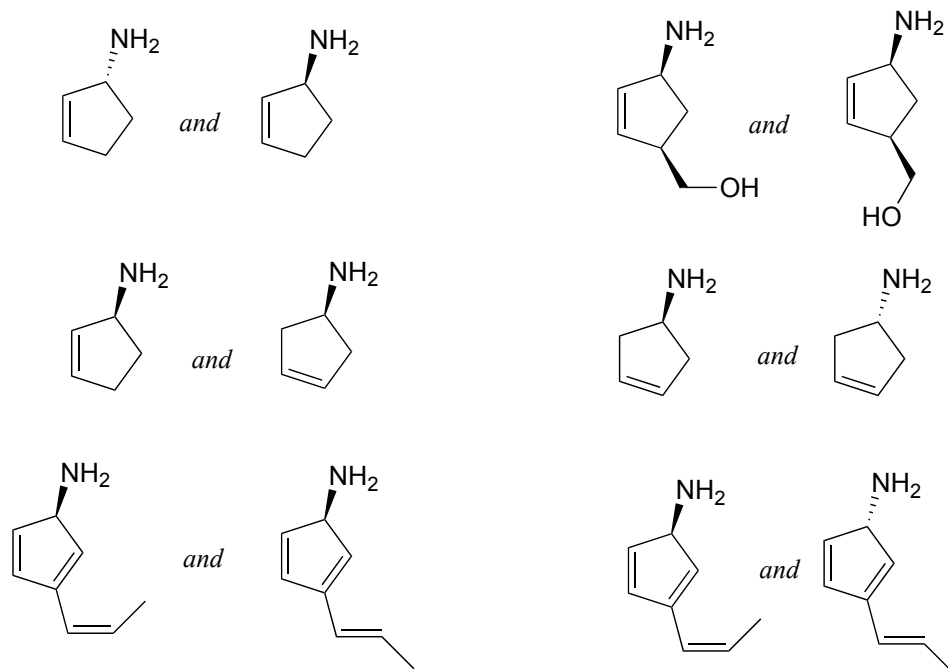
**P3.11:** Draw the structure of the following molecules:

- (*R*)-3-methyl-3-hexanol
- (*R*)-1-chloro-1-phenylethane
- (2*R*, 3*R*)-2,3-dihydroxybutanedioic acid (tartaric acid)
- (*S*)-(*E*)-4-chloro-3-ethyl-2-pentenoic acid
- (1*S*, 3*R*)-1-chloro-3-ethylcyclohexane

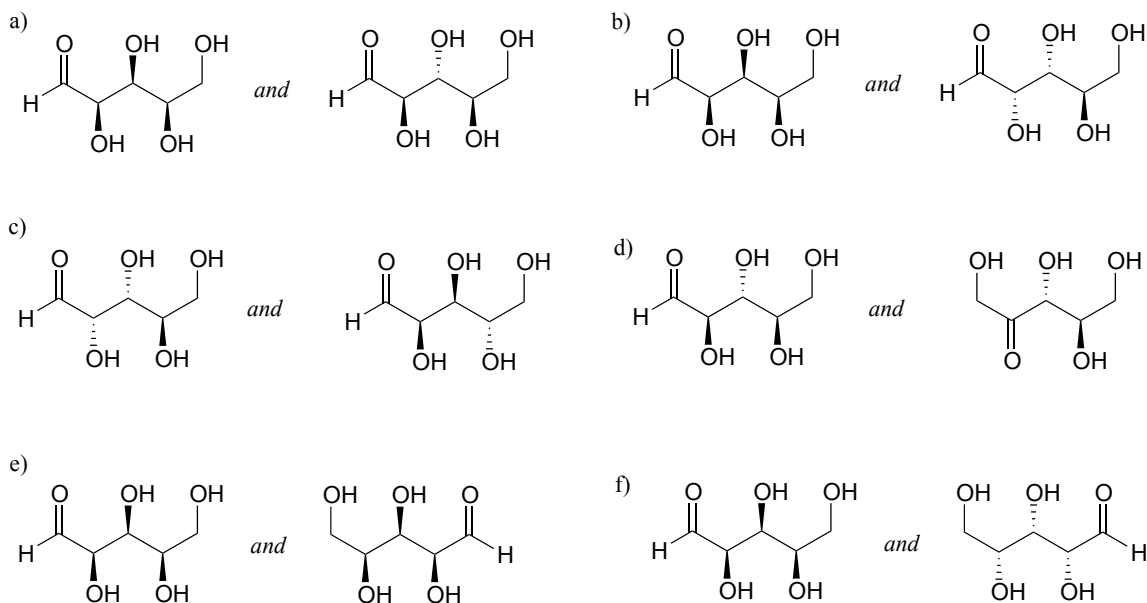
**P3.12:** Coelichelin (the structure below to the left) is a natural product from soil bacteria that was identified using a technique known as 'genome mining' (*Chemical and Engineering News* Sept. 19, 2005, p. 11). What is the relationship between coelichelin and the compound shown to the right? (Note: the two structures are drawn with the same conformation of the carbon backbone - just trace them through from end to end and identify where they are different!)



**P3.13:** Identify the relationships between the following pairs of structures (Not isomers, constitutional isomers, diastereomers but *not* epimers, epimers, enantiomers, identical)



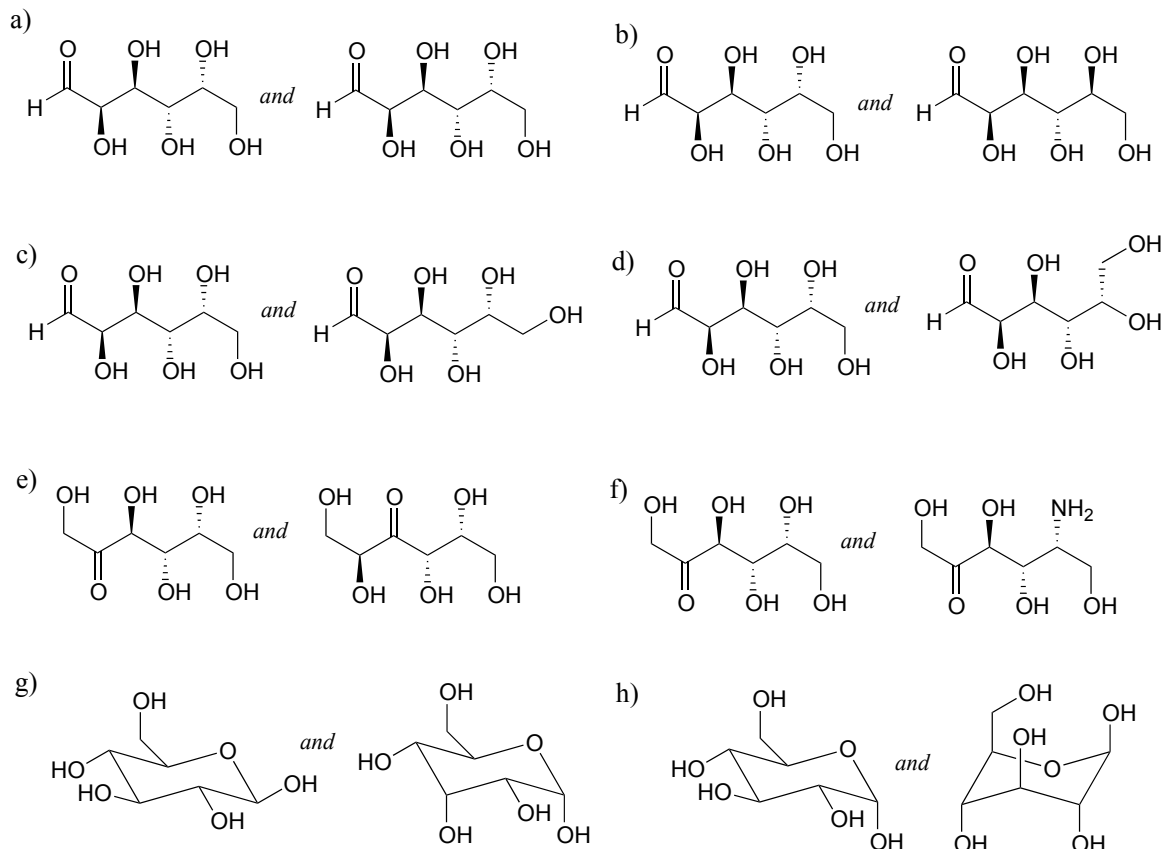
**P3.14:** Identify the relationships between each of the following pairs of pentose sugars (not isomers, constitutional isomers, diastereomers but *not* epimers, epimers, enantiomers, identical).



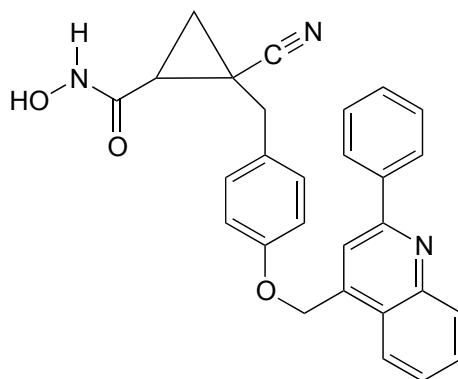
**P3.15:** Identify the relationships between each of the following pairs of hexose sugars (not isomers, constitutional isomers, diastereomers but *not* epimers, epimers, enantiomers, identical).



## Chapter 3: Conformation and Stereochemistry



**P3.16:** The compound drawn below (not showing stereochemistry) has been identified as a potential anti-inflammatory agent by scientists at Schering-Plough a pharmaceutical company (see *Chemical and Engineering News* Nov. 28, 2005 p. 29). How many stereoisomers are possible for the compound?



**P3.17:** Secramine is a synthetic compound that has been shown to interfere with the transport of newly synthesized proteins in the cell (see *Chemical and Engineering News* Nov. 28, 2005, p. 27). Also drawn below is a (hypothetical) isomer of secramine.



c) Do you think that *gauche* is also the most stable conformation of 1,2-dimethoxyethane? Explain.

**P3.20:** Draw the chair conformation of *cis*-1,2-dimethylcyclohexane.

a) Label the stereochemical configuration at C<sub>1</sub> and C<sub>2</sub> for the structure you drew.

b) Build a model of your molecule, and try out different possible boat conformations. Can you find one in which there is a plane of symmetry?

c) Is *cis*-1,2-dimethylcyclohexane a chiral molecule?

d) Is *cis*-1,4-dimethylcyclohexane chiral? How about *trans*-1,4-dimethylcyclohexane? How about *trans*-1-chloro-4-fluorocyclohexane?

**P3.21:** In some special cases, a 'stereocenter' can be composed of several atoms instead of just one, and molecules which contain such multi-atom stereocenters are indeed chiral. What is the relationship between the two difluorallene compounds below? It will be very helpful to make models, and review the fundamental definitions in this chapter.

